



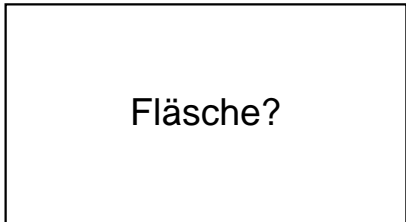
QR-Code scannen für noch mehr Arbeitsblätter!

Name:	Klasse:	Datum:
-------	---------	--------

Ermittle den Flächeninhalt der Rechtecke.


1.)

$$a = 53\text{cm}$$



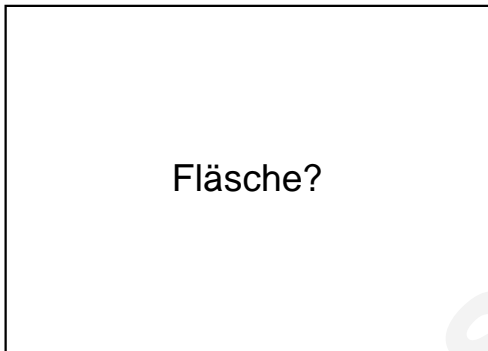
Fläche?

$$b = 29\text{cm}$$




2.)

$$a = 64\text{cm}$$



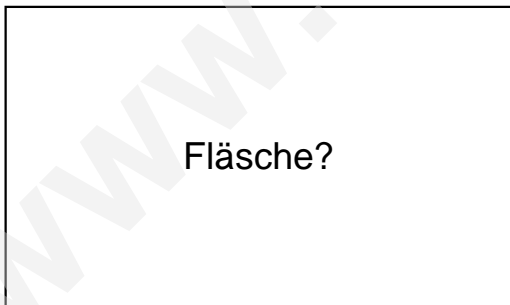
Fläche?

$$b = 46\text{cm}$$




3.)

$$a = 67\text{cm}$$



Fläche?

$$b = 40\text{cm}$$

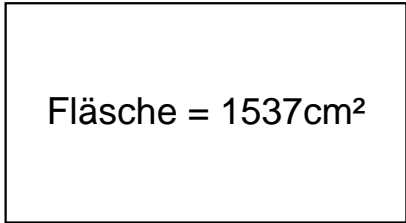




Lösungen

1.)

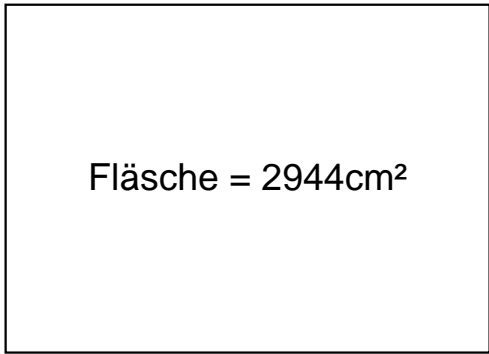
$$a = 53\text{cm}$$



$$\text{Fläche} = 1537\text{cm}^2 \quad b = 29\text{cm}$$

2.)

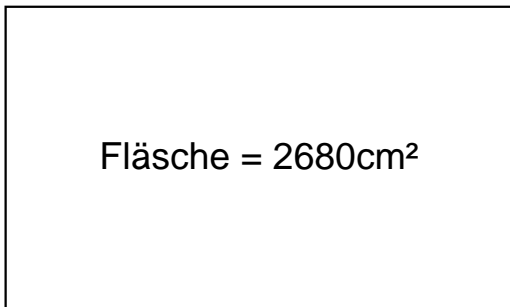
$$a = 64\text{cm}$$



$$\text{Fläche} = 2944\text{cm}^2 \quad b = 46\text{cm}$$

3.)

$$a = 67\text{cm}$$



$$\text{Fläche} = 2680\text{cm}^2 \quad b = 40\text{cm}$$