



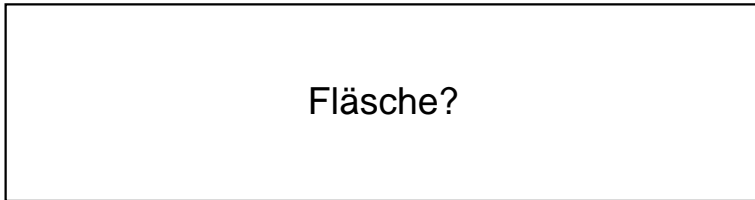
QR-Code scannen für noch mehr Arbeitsblätter!

Name:	Klasse:	Datum:
-------	---------	--------


Ermittle den Flächeninhalt der Rechtecke.

1.)

$a = 100\text{cm}$



$b = 26\text{cm}$




2.)

$a = 70\text{cm}$

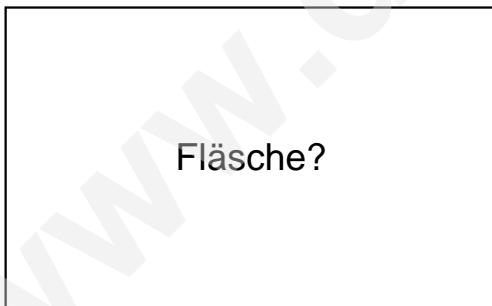


$b = 43\text{cm}$




3.)

$a = 65\text{cm}$



$b = 40\text{cm}$

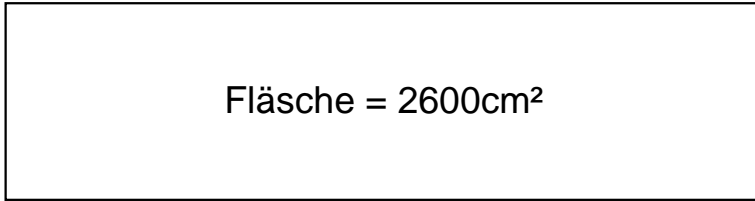




Lösungen

1.)

$$a = 100\text{cm}$$

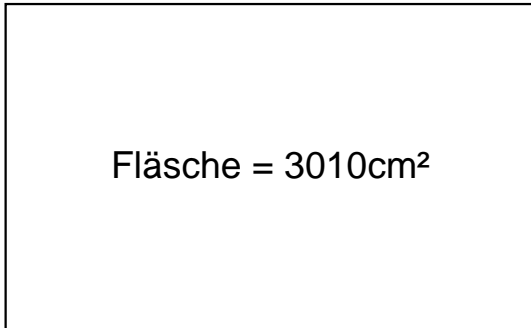


$$b = 26\text{cm}$$

---

2.)

$$a = 70\text{cm}$$

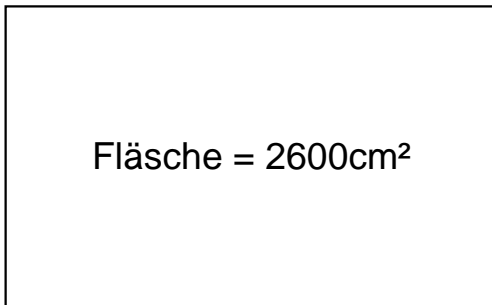


$$b = 43\text{cm}$$

---

3.)

$$a = 65\text{cm}$$



$$b = 40\text{cm}$$