



Name:

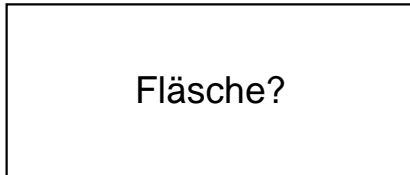
Klasse:

Datum:

Ermittle den Flächeninhalt der Rechtecke.


1.)

$a = 54\text{cm}$



Fläche?

$b = 23\text{cm}$




2.)

$a = 86\text{cm}$



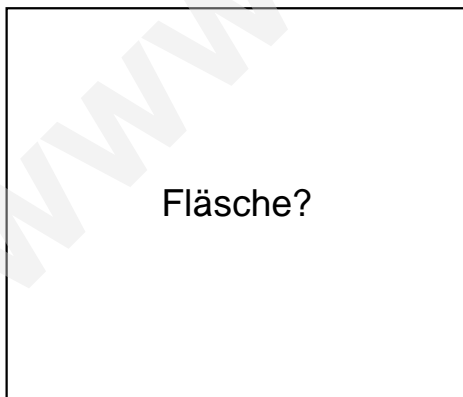
Fläche?

$b = 58\text{cm}$




3.)

$a = 61\text{cm}$



Fläche?

$b = 52\text{cm}$





## Lösungen

1.)

$$a = 54\text{cm}$$

$$\text{Fläche} = 1242\text{cm}^2$$

$$b = 23\text{cm}$$

---

2.)

$$a = 86\text{cm}$$

$$\text{Fläche} = 4988\text{cm}^2$$

$$b = 58\text{cm}$$

---

3.)

$$a = 61\text{cm}$$

$$\text{Fläche} = 3172\text{cm}^2$$

$$b = 52\text{cm}$$