



Name:

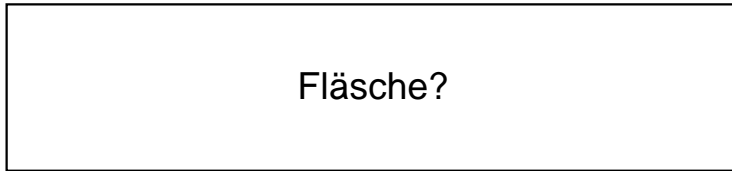
Klasse:

Datum:


Ermittle den Flächeninhalt der Rechtecke.

1.)

$a = 97\text{cm}$



$b = 22\text{cm}$




2.)

$a = 63\text{cm}$

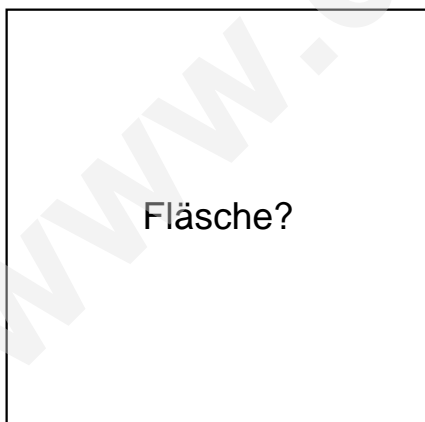


$b = 49\text{cm}$




3.)

$a = 56\text{cm}$



$b = 55\text{cm}$

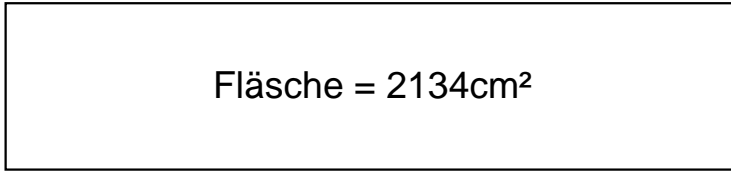




Lösungen

1.)

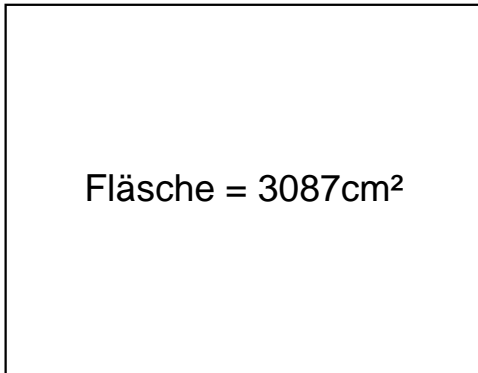
$$a = 97\text{cm}$$



$$b = 22\text{cm}$$

2.)

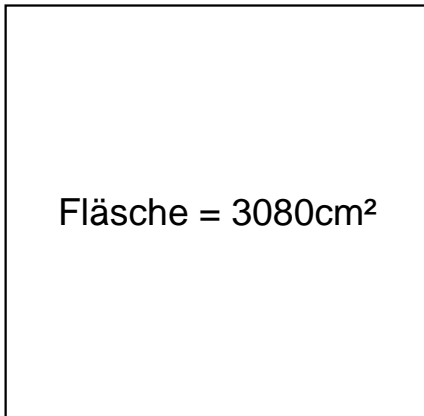
$$a = 63\text{cm}$$



$$b = 49\text{cm}$$

3.)

$$a = 56\text{cm}$$



$$b = 55\text{cm}$$