

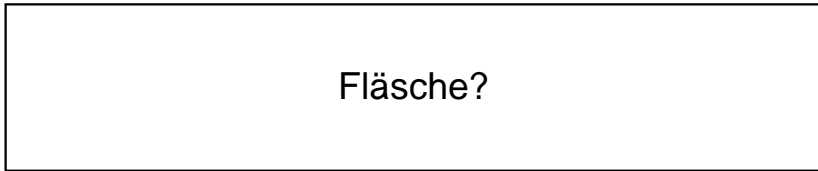


Name:	Klasse:	Datum:
-------	---------	--------


Ermittle den Flächeninhalt der Rechtecke.

1.)

$$a = 108\text{cm}$$

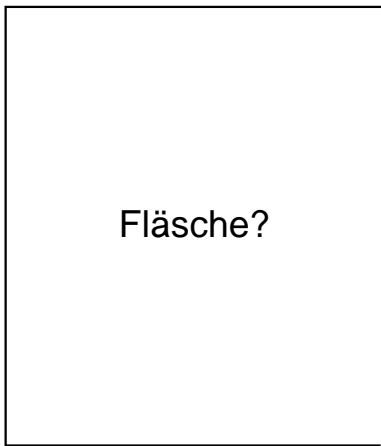


$$b = 22\text{cm}$$




2.)

$$a = 50\text{cm}$$

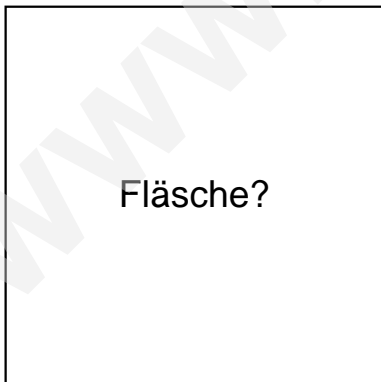


$$b = 58\text{cm}$$




3.)

$$a = 50\text{cm}$$



$$b = 50\text{cm}$$

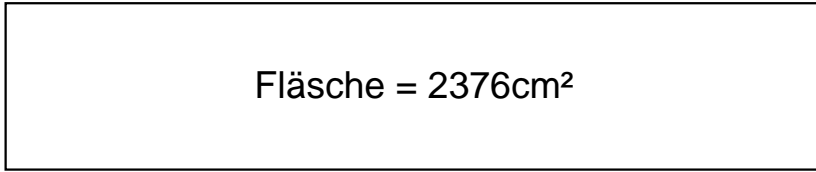




Lösungen

1.)

$$a = 108\text{cm}$$

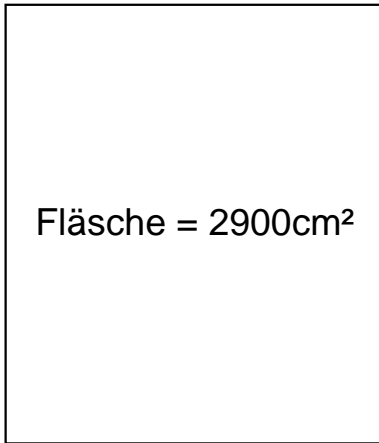


$$b = 22\text{cm}$$

---

2.)

$$a = 50\text{cm}$$

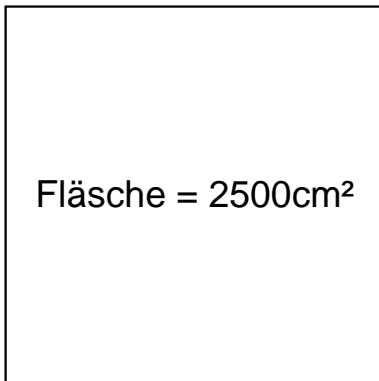


$$b = 58\text{cm}$$

---

3.)

$$a = 50\text{cm}$$



$$b = 50\text{cm}$$