



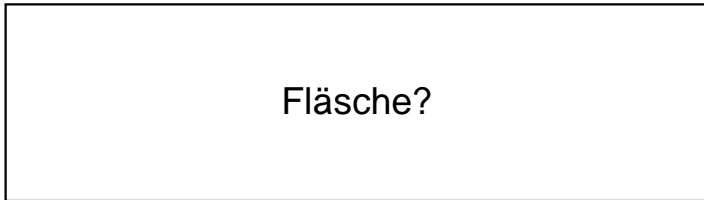
QR-Code scannen für noch mehr Arbeitsblätter!

Name:	Klasse:	Datum:
-------	---------	--------


Ermittle den Flächeninhalt der Rechtecke.

1.)

$$a = 93\text{cm}$$

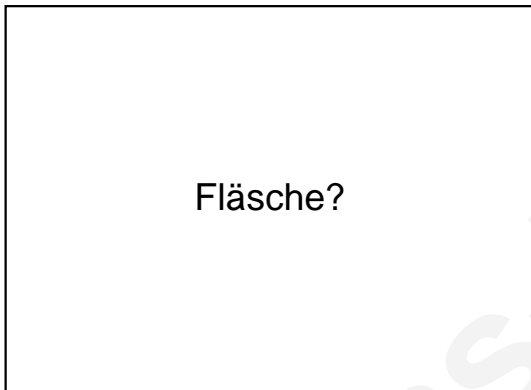


$$b = 26\text{cm}$$




2.)

$$a = 70\text{cm}$$



$$b = 51\text{cm}$$




3.)

$$a = 59\text{cm}$$



$$b = 58\text{cm}$$

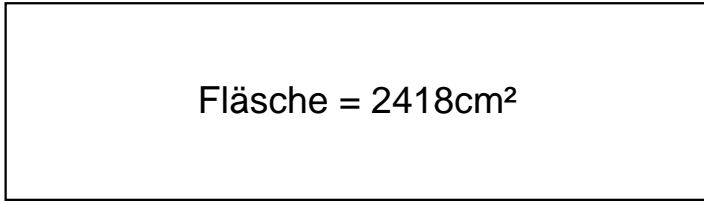




Lösungen

1.)

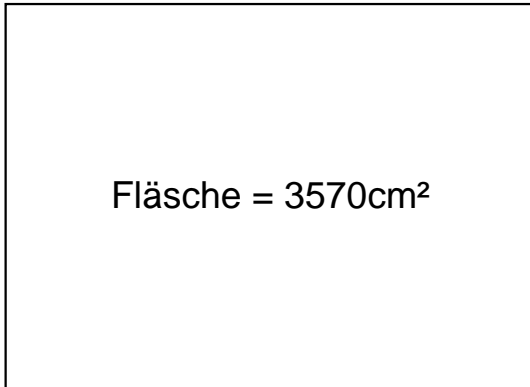
$$a = 93\text{cm}$$



$$b = 26\text{cm}$$

2.)

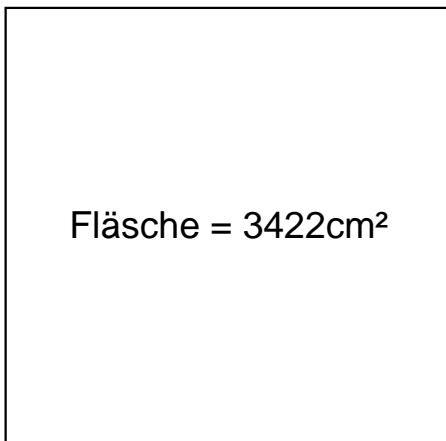
$$a = 70\text{cm}$$



$$b = 51\text{cm}$$

3.)

$$a = 59\text{cm}$$



$$b = 58\text{cm}$$