



Name:	Klasse:	Datum:
-------	---------	--------


Ermittle den Flächeninhalt der Rechtecke.

1.)

$a = 60\text{cm}$

Fläche?
---------

$b = 22\text{cm}$




2.)

$a = 84\text{cm}$

Fläche?
---------

$b = 58\text{cm}$




3.)

$a = 92\text{cm}$

Fläche?
---------

$b = 56\text{cm}$





## Lösungen

1.)

$$a = 60\text{cm}$$

$$\text{Fläche} = 1320\text{cm}^2$$

$$b = 22\text{cm}$$

---

2.)

$$a = 84\text{cm}$$

$$\text{Fläche} = 4872\text{cm}^2$$

$$b = 58\text{cm}$$

---

3.)

$$a = 92\text{cm}$$

$$\text{Fläche} = 5152\text{cm}^2$$

$$b = 56\text{cm}$$