

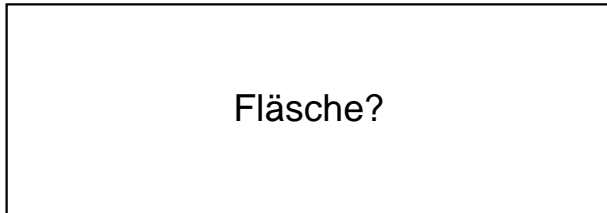


Name:	Klasse:	Datum:
-------	---------	--------


Ermittle den Flächeninhalt der Rechtecke.

1.)

$a = 80\text{cm}$



$b = 28\text{cm}$




2.)

$a = 96\text{cm}$

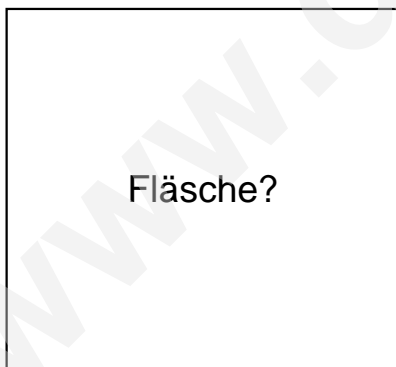


$b = 40\text{cm}$




3.)

$a = 52\text{cm}$



$b = 48\text{cm}$

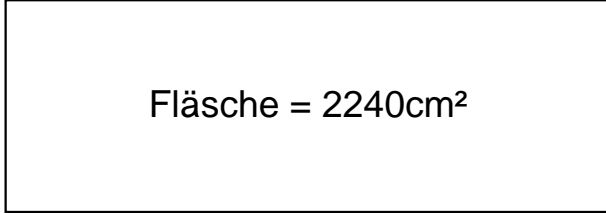




Lösungen

1.)

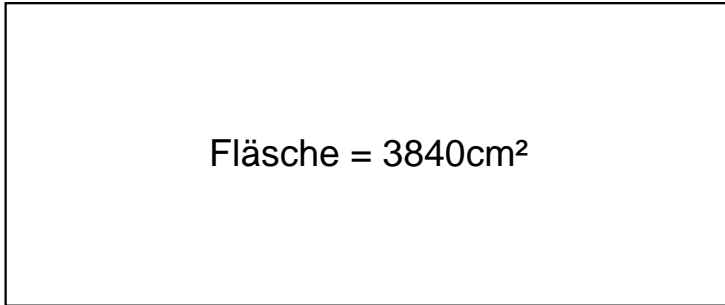
$$a = 80\text{cm}$$



$$b = 28\text{cm}$$

2.)

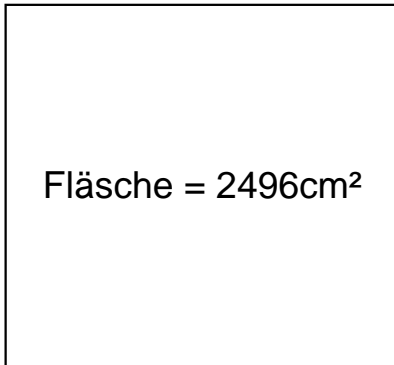
$$a = 96\text{cm}$$



$$b = 40\text{cm}$$

3.)

$$a = 52\text{cm}$$



$$b = 48\text{cm}$$