

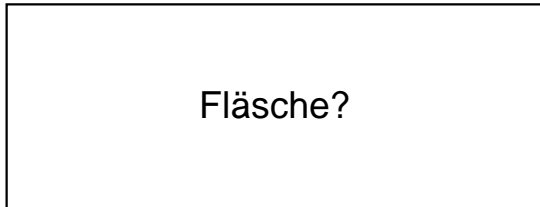


Name:	Klasse:	Datum:
-------	---------	--------

Ermittle den Flächeninhalt der Rechtecke.


1.)

$a = 71\text{cm}$



Fläche?

$b = 27\text{cm}$




2.)

$a = 94\text{cm}$



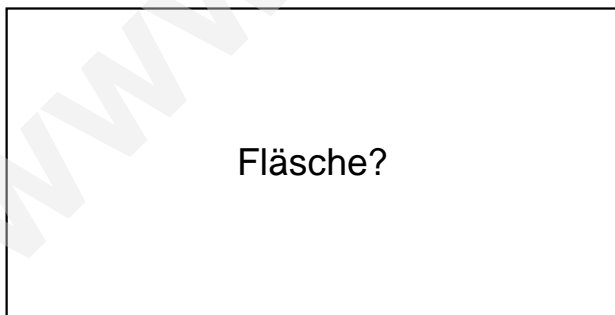
Fläche?

$b = 58\text{cm}$




3.)

$a = 81\text{cm}$



Fläche?

$b = 41\text{cm}$

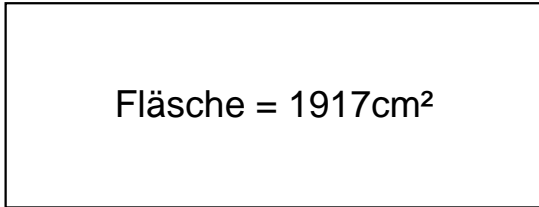




## Lösungen

1.)

$$a = 71\text{cm}$$

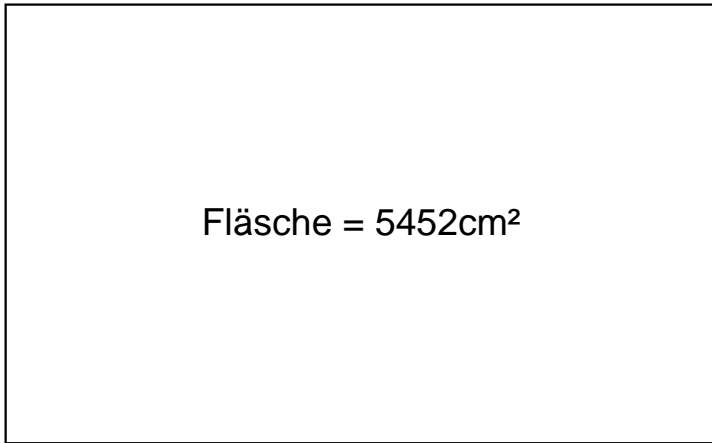


$$b = 27\text{cm}$$

---

2.)

$$a = 94\text{cm}$$

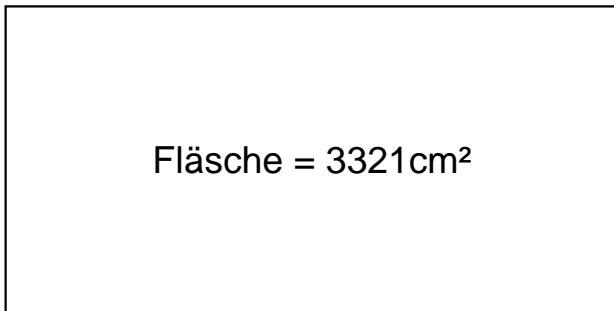


$$b = 58\text{cm}$$

---

3.)

$$a = 81\text{cm}$$



$$b = 41\text{cm}$$