



Name:

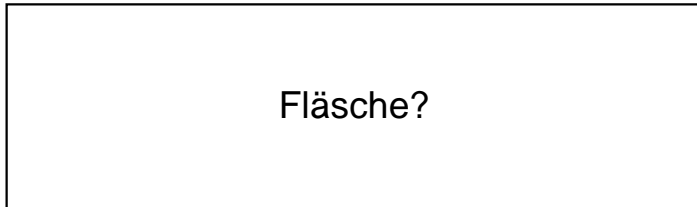
Klasse:

Datum:


Ermittle den Flächeninhalt der Rechtecke.

1.)

$a = 92\text{cm}$

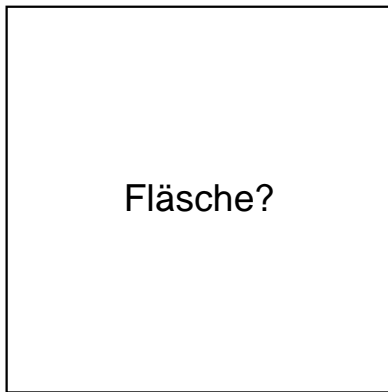


$b = 27\text{cm}$




2.)

$a = 51\text{cm}$

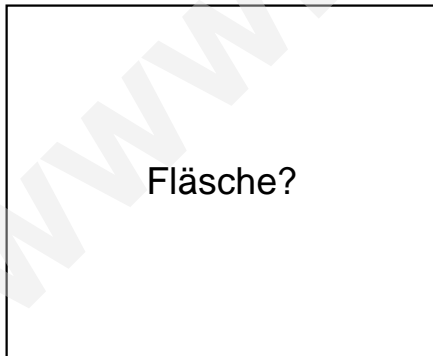


$b = 51\text{cm}$




3.)

$a = 57\text{cm}$



$b = 47\text{cm}$

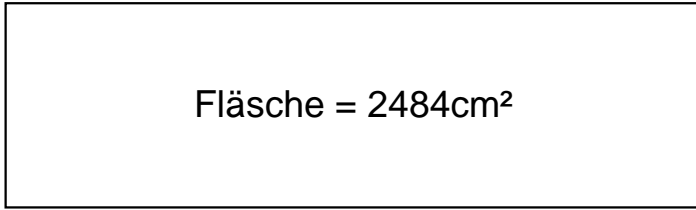




Lösungen

1.)

$$a = 92\text{cm}$$

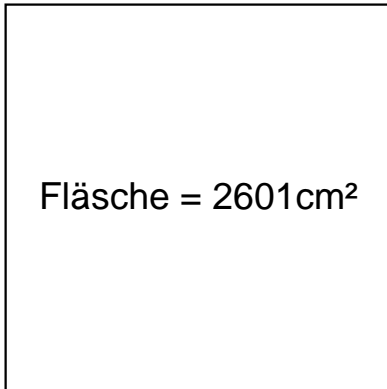


$$b = 27\text{cm}$$

---

2.)

$$a = 51\text{cm}$$

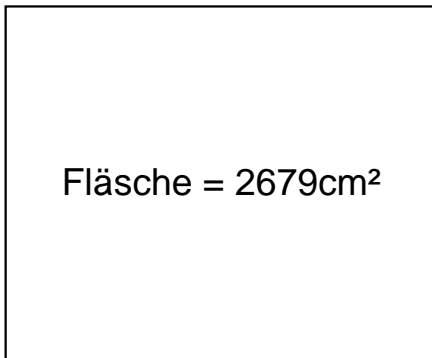


$$b = 51\text{cm}$$

---

3.)

$$a = 57\text{cm}$$



$$b = 47\text{cm}$$