

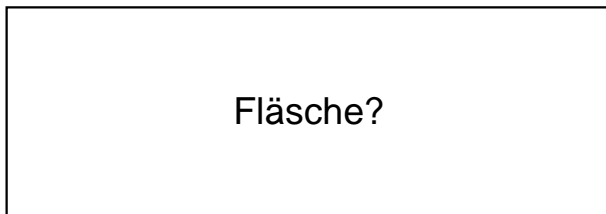


Name:	Klasse:	Datum:
-------	---------	--------

Ermittle den Flächeninhalt der Rechtecke.


1.)

$a = 80\text{cm}$



Fläche?

$b = 28\text{cm}$




2.)

$a = 70\text{cm}$



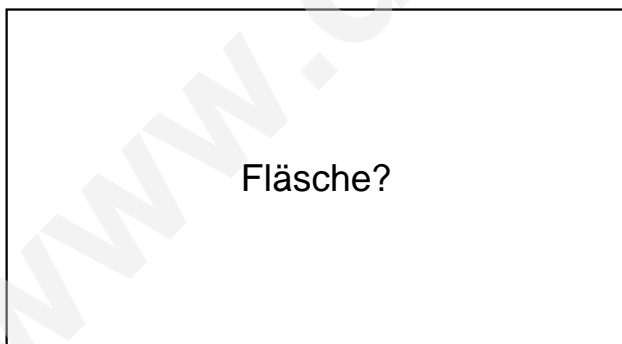
Fläche?

$b = 41\text{cm}$




3.)

$a = 82\text{cm}$



Fläche?

$b = 45\text{cm}$

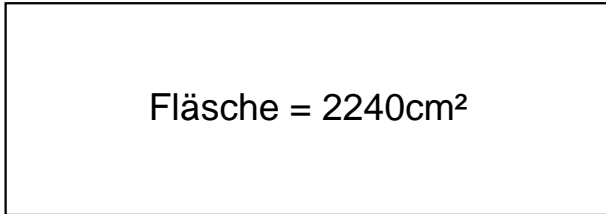




Lösungen

1.)

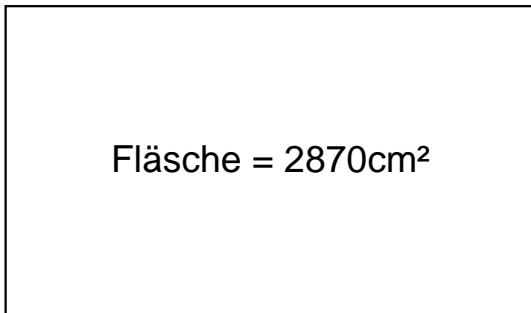
$$a = 80\text{cm}$$



$$b = 28\text{cm}$$

2.)

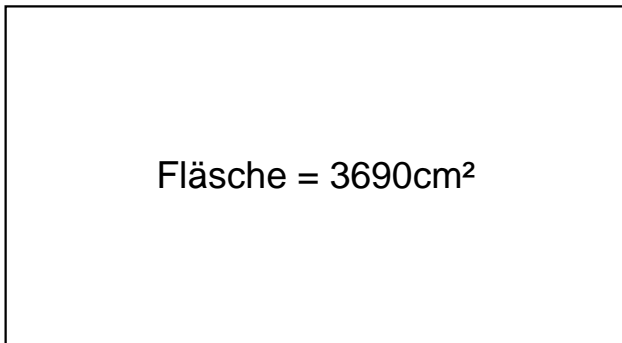
$$a = 70\text{cm}$$



$$b = 41\text{cm}$$

3.)

$$a = 82\text{cm}$$



$$b = 45\text{cm}$$