



Name:

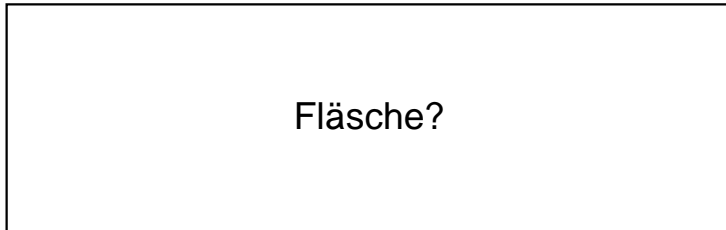
Klasse:

Datum:

Ermittle den Flächeninhalt der Rechtecke.


1.)

$a = 96\text{cm}$



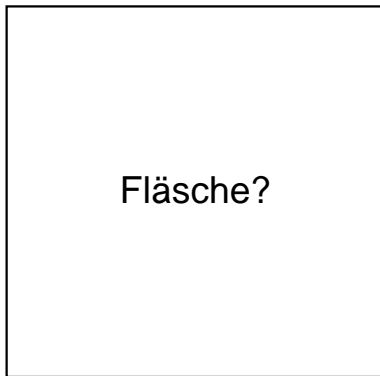
Fläche?

$b = 30\text{cm}$




2.)

$a = 50\text{cm}$



Fläche?

$b = 49\text{cm}$




3.)

$a = 55\text{cm}$



Fläche?

$b = 55\text{cm}$

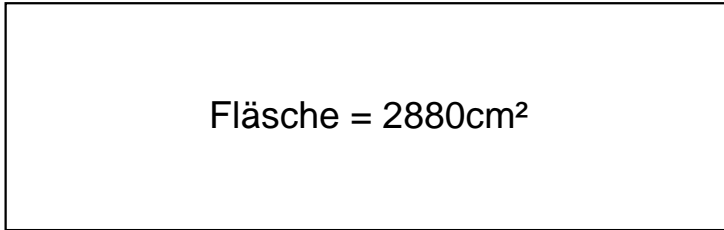




Lösungen

1.)

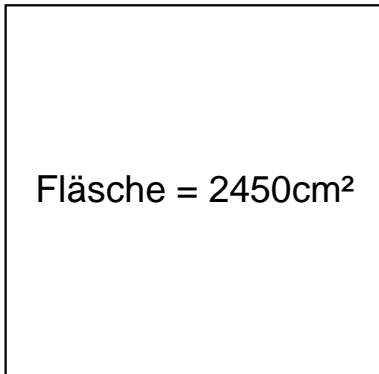
$$a = 96\text{cm}$$



$$b = 30\text{cm}$$

2.)

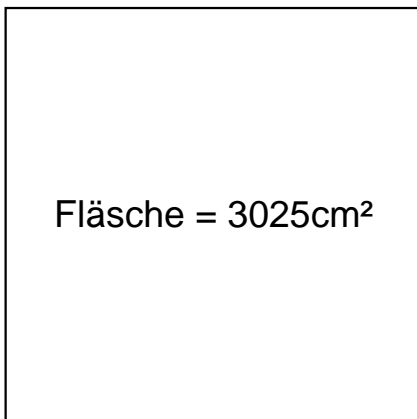
$$a = 50\text{cm}$$



$$b = 49\text{cm}$$

3.)

$$a = 55\text{cm}$$



$$b = 55\text{cm}$$