



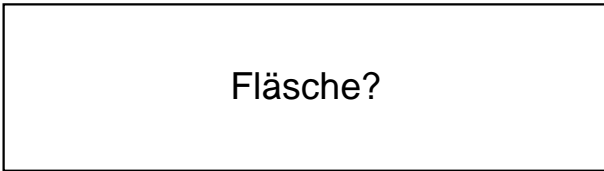
QR-Code scannen für noch mehr Arbeitsblätter!

Name:	Klasse:	Datum:
-------	---------	--------


Ermittle den Flächeninhalt der Rechtecke.

1.)

$a = 80\text{cm}$

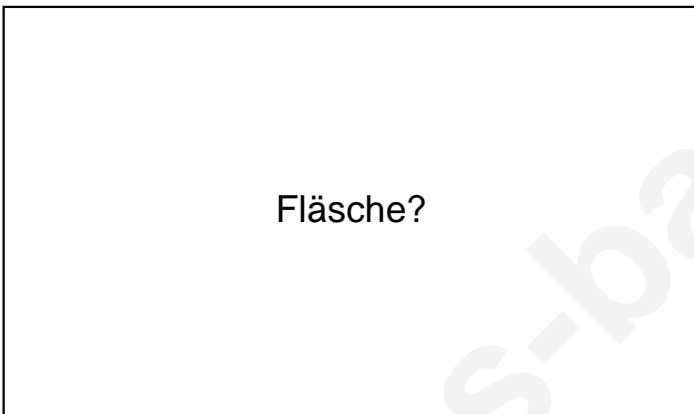


$b = 22\text{cm}$




2.)

$a = 92\text{cm}$

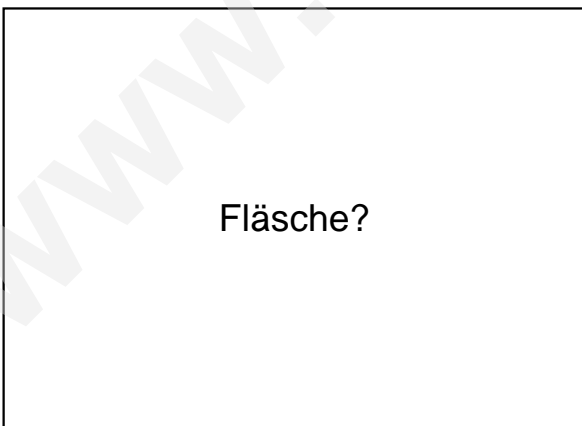


$b = 54\text{cm}$




3.)

$a = 77\text{cm}$



$b = 56\text{cm}$

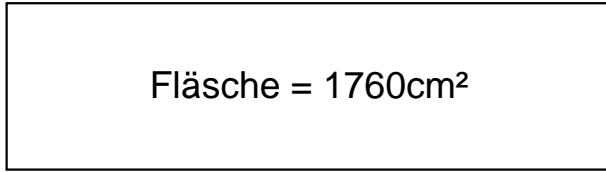




Lösungen

1.)

$$a = 80\text{cm}$$



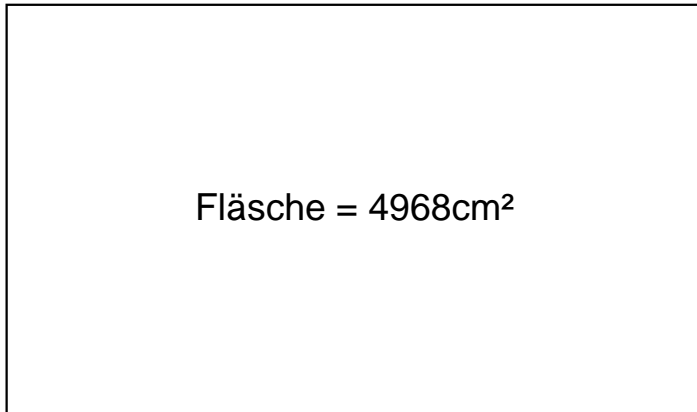
$$\text{Fläche} = 1760\text{cm}^2$$

$$b = 22\text{cm}$$

---

2.)

$$a = 92\text{cm}$$



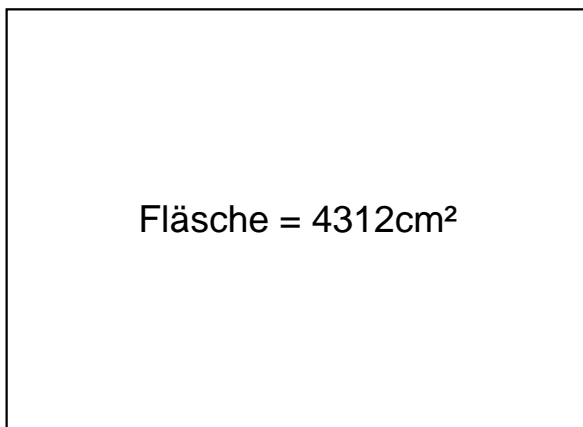
$$\text{Fläche} = 4968\text{cm}^2$$

$$b = 54\text{cm}$$

---

3.)

$$a = 77\text{cm}$$



$$\text{Fläche} = 4312\text{cm}^2$$

$$b = 56\text{cm}$$