



Name:	Klasse:	Datum:
-------	---------	--------


Ermittle den Flächeninhalt der Rechtecke.

1.)

$a = 73\text{cm}$

Fläche?

$b = 20\text{cm}$




2.)

$a = 56\text{cm}$

Fläche?

$b = 53\text{cm}$




3.)

$a = 65\text{cm}$

Fläche?

$b = 54\text{cm}$





Lösungen

1.)

$$a = 73\text{cm}$$

$$\text{Fläche} = 1460\text{cm}^2$$

$$b = 20\text{cm}$$

2.)

$$a = 56\text{cm}$$

$$\text{Fläche} = 2968\text{cm}^2$$

$$b = 53\text{cm}$$

3.)

$$a = 65\text{cm}$$

$$\text{Fläche} = 3510\text{cm}^2$$

$$b = 54\text{cm}$$