



Name:	Klasse:	Datum:
-------	---------	--------


Ermittle den Flächeninhalt der Rechtecke.

1.)

$a = 82\text{cm}$

Fläche?

$b = 26\text{cm}$




2.)

$a = 81\text{cm}$

Fläche?

$b = 48\text{cm}$




3.)

$a = 83\text{cm}$

Fläche?

$b = 51\text{cm}$

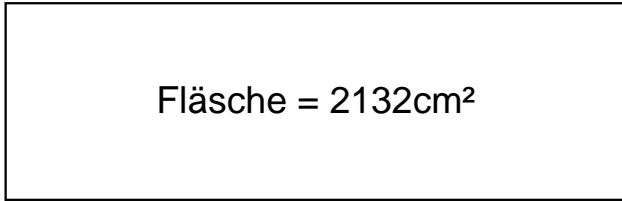




Lösungen

1.)

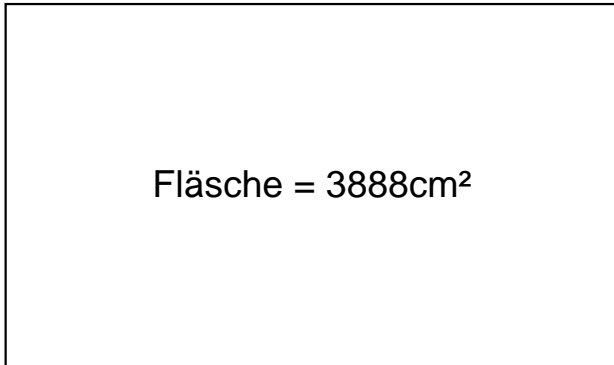
$$a = 82\text{cm}$$



$$b = 26\text{cm}$$

2.)

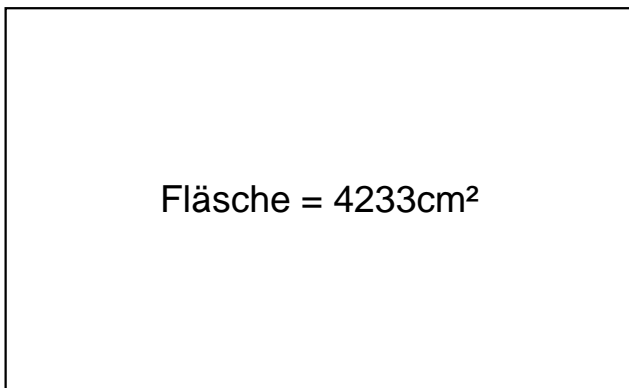
$$a = 81\text{cm}$$



$$b = 48\text{cm}$$

3.)

$$a = 83\text{cm}$$



$$b = 51\text{cm}$$