



Name:

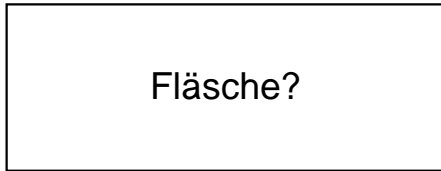
Klasse:

Datum:


Ermittle den Flächeninhalt der Rechtecke.

1.)

$a = 58\text{cm}$



$b = 22\text{cm}$




2.)

$a = 65\text{cm}$

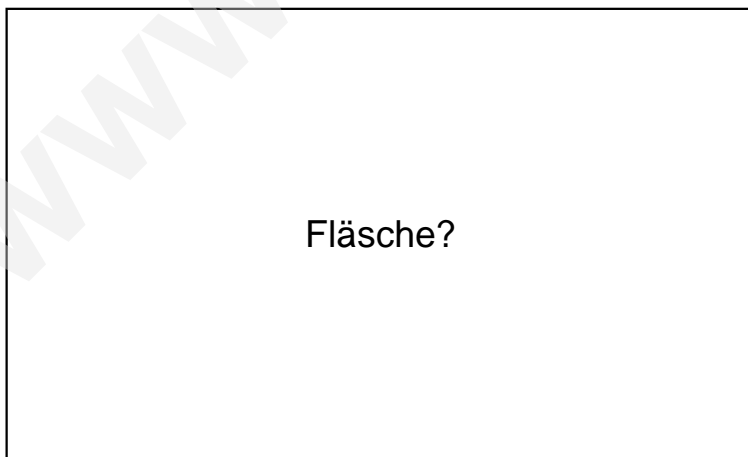


$b = 60\text{cm}$




3.)

$a = 99\text{cm}$



$b = 60\text{cm}$

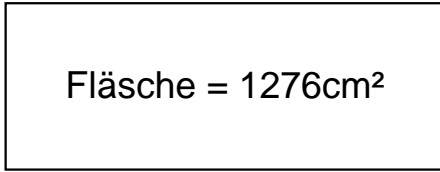




Lösungen

1.)

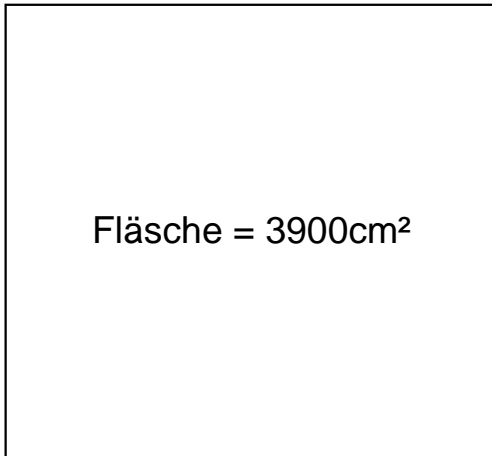
$$a = 58\text{cm}$$



$$b = 22\text{cm}$$

2.)

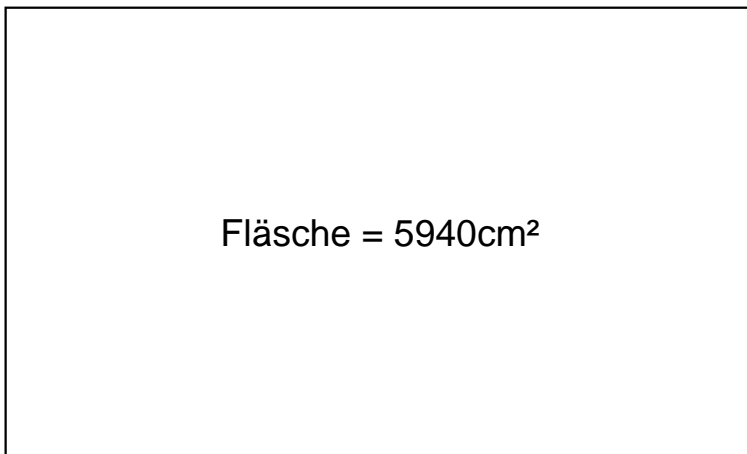
$$a = 65\text{cm}$$



$$b = 60\text{cm}$$

3.)

$$a = 99\text{cm}$$



$$b = 60\text{cm}$$