

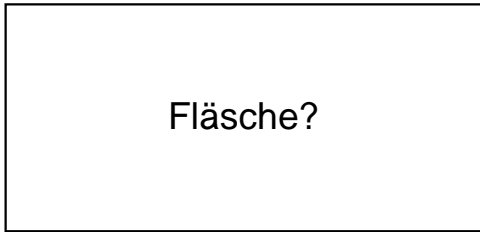


Name:	Klasse:	Datum:
-------	---------	--------


Ermittle den Flächeninhalt der Rechtecke.

1.)

$$a = 63\text{cm}$$



$$b = 30\text{cm}$$




2.)

$$a = 61\text{cm}$$

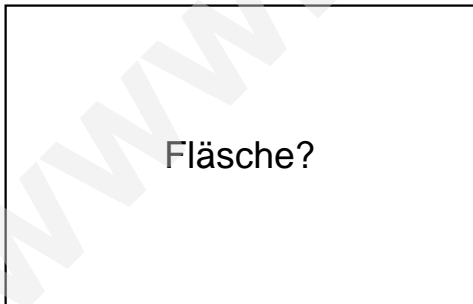


$$b = 48\text{cm}$$




3.)

$$a = 62\text{cm}$$



$$b = 40\text{cm}$$

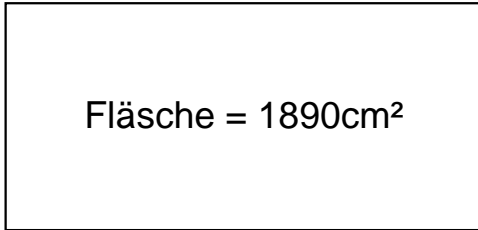




Lösungen

1.)

$$a = 63\text{cm}$$

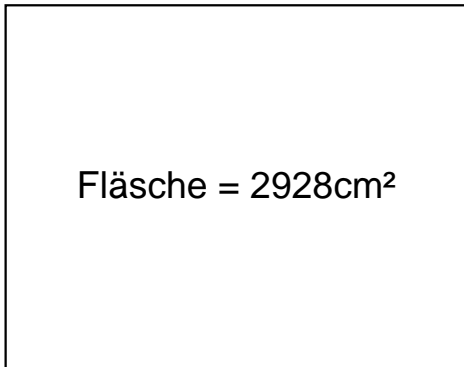


$$\text{Fläche} = 1890\text{cm}^2$$

$$b = 30\text{cm}$$

2.)

$$a = 61\text{cm}$$

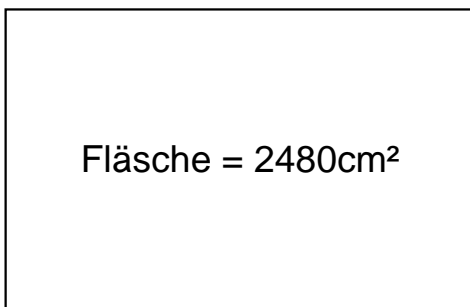


$$\text{Fläche} = 2928\text{cm}^2$$

$$b = 48\text{cm}$$

3.)

$$a = 62\text{cm}$$



$$\text{Fläche} = 2480\text{cm}^2$$

$$b = 40\text{cm}$$