



Name:

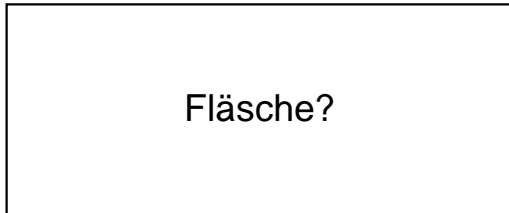
Klasse:

Datum:

Ermittle den Flächeninhalt der Rechtecke.


1.)

$a = 67\text{cm}$



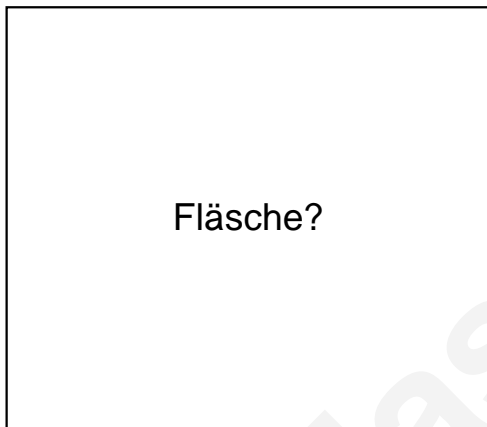
Fläche?

$b = 28\text{cm}$




2.)

$a = 64\text{cm}$



Fläche?

$b = 56\text{cm}$




3.)

$a = 95\text{cm}$



Fläche?

$b = 54\text{cm}$

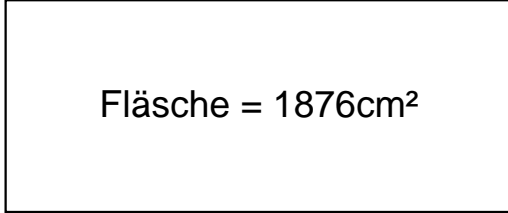




Lösungen

1.)

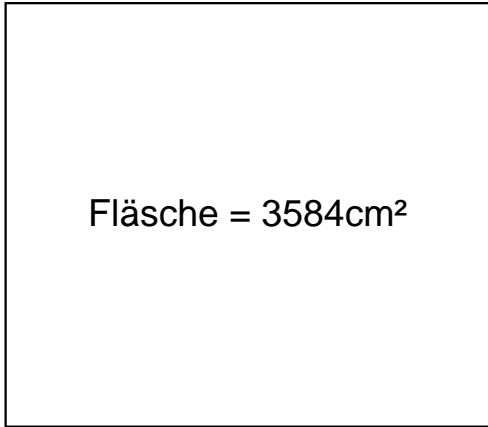
$$a = 67\text{cm}$$



$$b = 28\text{cm}$$

2.)

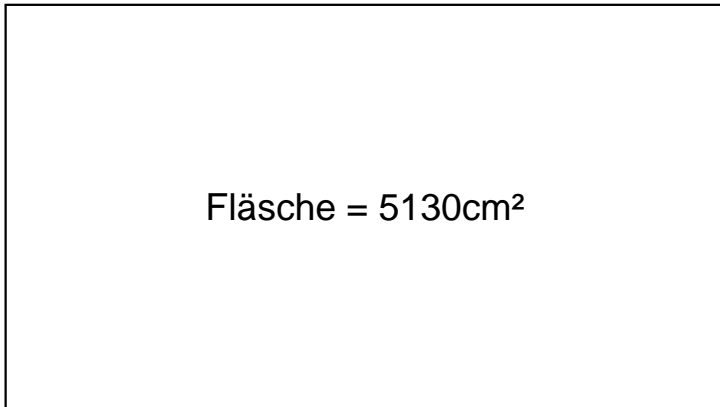
$$a = 64\text{cm}$$



$$b = 56\text{cm}$$

3.)

$$a = 95\text{cm}$$



$$b = 54\text{cm}$$