



Name:

Klasse:

Datum:


Ermittle den Flächeninhalt der Rechtecke.

1.)

$a = 90\text{cm}$

Fläche?

$b = 21\text{cm}$




2.)

$a = 53\text{cm}$

Fläche?

$b = 45\text{cm}$




3.)

$a = 58\text{cm}$

Fläche?

$b = 41\text{cm}$

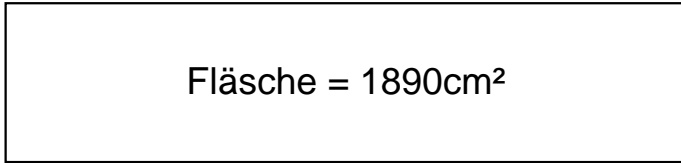




Lösungen

1.)

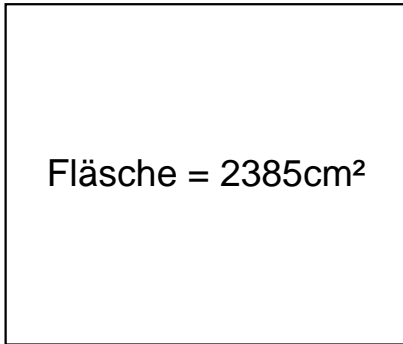
$$a = 90\text{cm}$$



$$b = 21\text{cm}$$

2.)

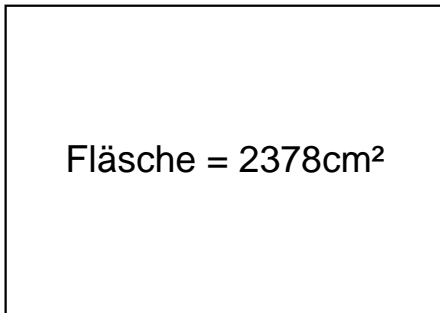
$$a = 53\text{cm}$$



$$b = 45\text{cm}$$

3.)

$$a = 58\text{cm}$$



$$b = 41\text{cm}$$