



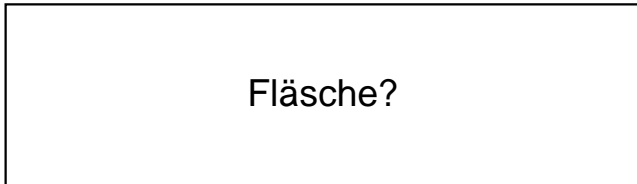
QR-Code scannen für noch mehr Arbeitsblätter!

Name:	Klasse:	Datum:
-------	---------	--------


Ermittle den Flächeninhalt der Rechtecke.

1.)

$$a = 84\text{cm}$$



$$b = 24\text{cm}$$




2.)

$$a = 65\text{cm}$$

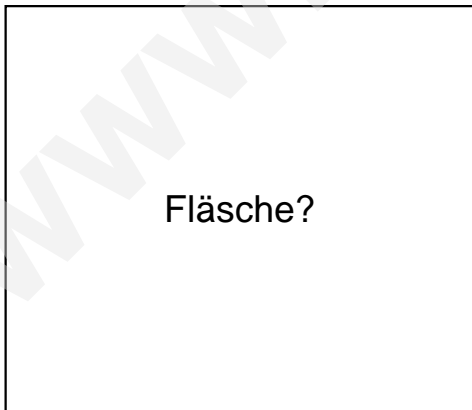


$$b = 55\text{cm}$$




3.)

$$a = 62\text{cm}$$



$$b = 54\text{cm}$$

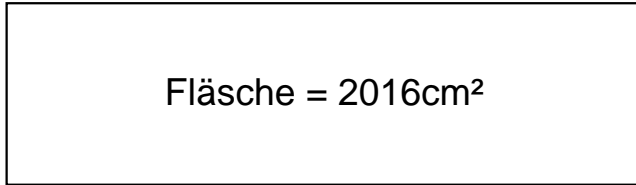




Lösungen

1.)

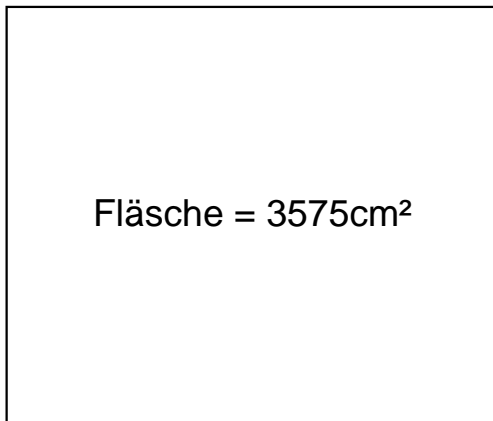
$$a = 84\text{cm}$$



$$b = 24\text{cm}$$

2.)

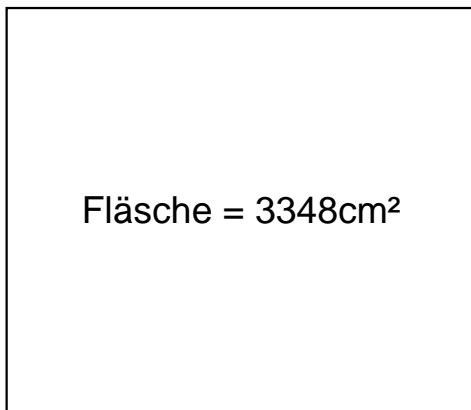
$$a = 65\text{cm}$$



$$b = 55\text{cm}$$

3.)

$$a = 62\text{cm}$$



$$b = 54\text{cm}$$