



Name:

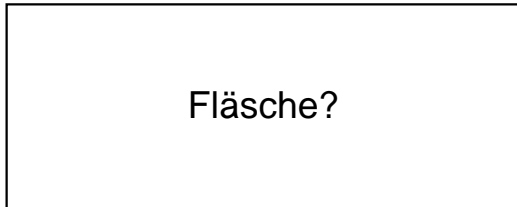
Klasse:

Datum:

Ermittle den Flächeninhalt der Rechtecke.


1.)

$a = 68\text{cm}$



Fläche?

$b = 27\text{cm}$




2.)

$a = 80\text{cm}$



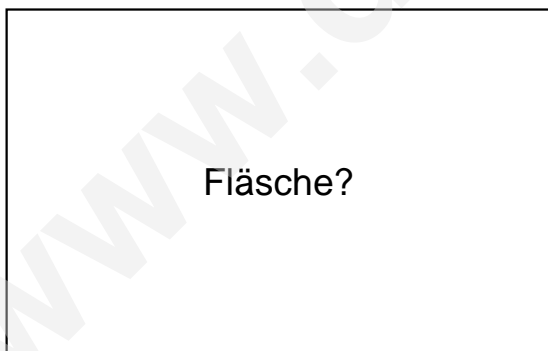
Fläche?

$b = 42\text{cm}$




3.)

$a = 72\text{cm}$



Fläche?

$b = 46\text{cm}$

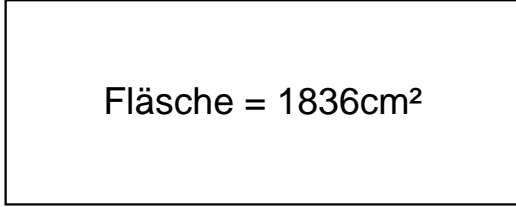




## Lösungen

1.)

$$a = 68\text{cm}$$

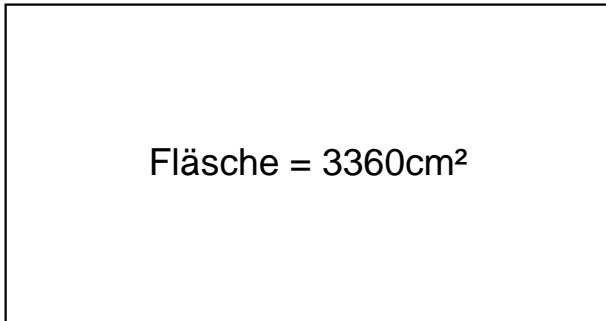


$$b = 27\text{cm}$$

---

2.)

$$a = 80\text{cm}$$

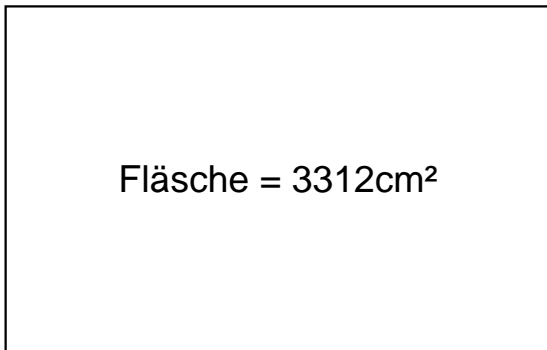


$$b = 42\text{cm}$$

---

3.)

$$a = 72\text{cm}$$



$$b = 46\text{cm}$$