

Name:

Klasse:


Datum:

Aufgabe 1.



=

Aufgabe 2.




=

Aufgabe 3.




=

Aufgabe 4.



=

Aufgabe 5.



=


Lösungen:

Aufgabe 1:




3

Aufgabe 2:




9

Aufgabe 3:




7

Aufgabe 4:



5

Aufgabe 5:



4