

Name:


Klasse:

Datum:

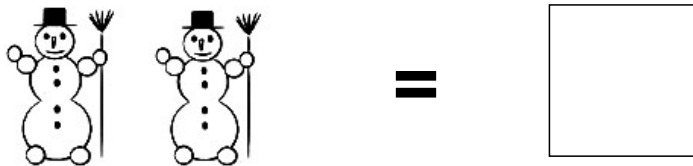
Aufgabe 1.



Aufgabe 2.



Aufgabe 3.



Aufgabe 4.




Aufgabe 5.




Lösungen:

Aufgabe 1:




7

Aufgabe 2:




5

Aufgabe 3:



2

Aufgabe 4:



9

Aufgabe 5:



3