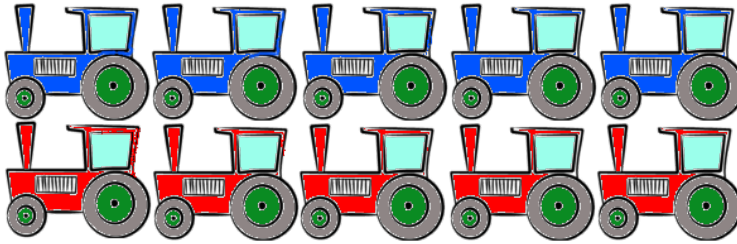


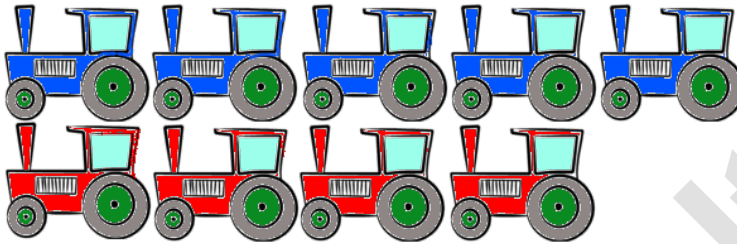
Name:	Klasse:	Datum:
-------	---------	--------

Aufgabe 1.




=

Aufgabe 2.



=

Aufgabe 3.




=

Aufgabe 4.



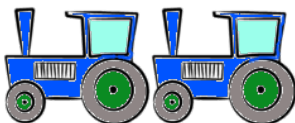
=

Aufgabe 5.



=

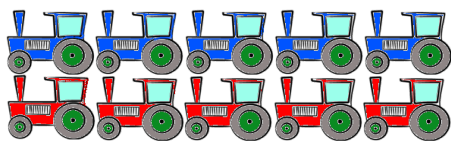
Aufgabe 6.



=


Lösungen

Aufgabe 1:



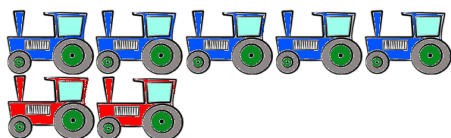
10

Aufgabe 2:



9

Aufgabe 3:




7

Aufgabe 4:



4

Aufgabe 5:



6

Aufgabe 6:



2