

Name:	Klasse:	Datum:
-------	---------	--------


Aufgabe 1.



=



Aufgabe 2.




=




Aufgabe 3.



=



Aufgabe 4.




=




Aufgabe 5.



=



Aufgabe 6.



=



Lösungen




3



1




2



7



5



10