


Name:	Klasse:	Datum:
-------	---------	--------


Aufgabe 1.



=



Aufgabe 2.




=



Aufgabe 3.



=




Aufgabe 4.




=



Aufgabe 5.



=



Aufgabe 6.




=



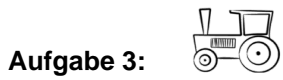
Lösungen



3




9



1



4



8



5