



Name:	Klasse:	Datum:
-------	---------	--------


Aufgabe 1.



=



Aufgabe 2.




=




Aufgabe 3.



=



Aufgabe 4.




=




Aufgabe 5.



=



Aufgabe 6.




=




Lösungen

Aufgabe 1:



9

Aufgabe 2:




8

Aufgabe 3:



1

Aufgabe 4:




10

Aufgabe 5:



4

Aufgabe 6:



7