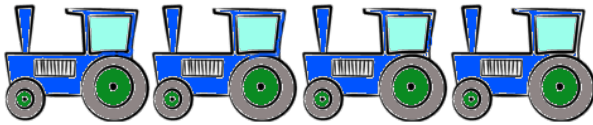


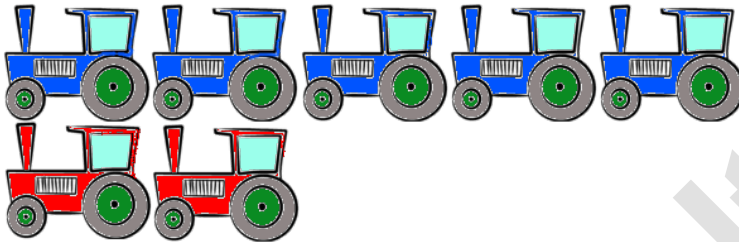
Name:	Klasse:	Datum:
-------	---------	--------

Aufgabe 1.



=

Aufgabe 2.



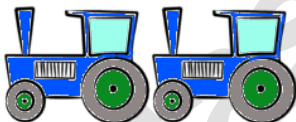
=

Aufgabe 3.




=

Aufgabe 4.




=

Aufgabe 5.



=

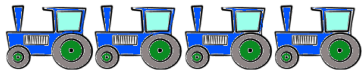
Aufgabe 6.



=

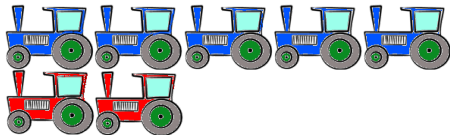
Lösungen

Aufgabe 1:



4

Aufgabe 2:



7

Aufgabe 3:




1

Aufgabe 4:




2

Aufgabe 5:



10

Aufgabe 6:



6