




Übungsaufgaben Rechnen mit Bildern.

Name:	Klasse:	Datum:
-------	---------	--------


Aufgabe 1.



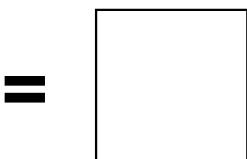
+



Aufgabe 2.




+



Übungsaufgaben Rechnen mit Bildern.


Lösungen

Aufgabe 1:



9

Aufgabe 2:



11