


Name:	Klasse:	Datum:
-------	---------	--------

Aufgabe 1.




+



=




Aufgabe 2.



+




=




Lösungen

Aufgabe 1:



10

Aufgabe 2:



9