

Aufgaben rechnen mit Bildern. Der Würfel.
Ergebnisse im Zahlenbereich bis 16.

Name:	Klasse:	Datum:
-------	---------	--------

Aufgabe 1.)

Zähle die Punkte auf den Würfeln und addiere.

$\begin{array}{|c|} \hline \bullet & \bullet \\ \hline \bullet & \bullet \\ \hline \end{array} + \begin{array}{|c|} \hline \bullet & \bullet \\ \hline \bullet & \bullet \\ \hline \end{array} + \begin{array}{|c|} \hline \bullet & \bullet \\ \hline \bullet & \bullet \\ \hline \end{array} = \begin{array}{|c|} \hline \\ \hline \end{array}$

$\begin{array}{|c|} \hline \\ \hline \end{array} + \begin{array}{|c|} \hline \\ \hline \end{array} + \begin{array}{|c|} \hline \\ \hline \end{array} = \begin{array}{|c|} \hline \\ \hline \end{array}$

Aufgabe 2.)

Zähle die Punkte auf den Würfeln und addiere.


$\begin{array}{|c|} \hline \bullet & \bullet \\ \hline \bullet & \bullet \\ \hline \bullet & \bullet \\ \hline \end{array} + \begin{array}{|c|} \hline \bullet & \bullet \\ \hline \bullet & \bullet \\ \hline \end{array} + \begin{array}{|c|} \hline \bullet & \bullet \\ \hline \bullet & \bullet \\ \hline \bullet & \bullet \\ \hline \end{array} = \begin{array}{|c|} \hline \\ \hline \end{array}$

$\begin{array}{|c|} \hline \\ \hline \end{array} + \begin{array}{|c|} \hline \\ \hline \end{array} + \begin{array}{|c|} \hline \\ \hline \end{array} = \begin{array}{|c|} \hline \\ \hline \end{array}$

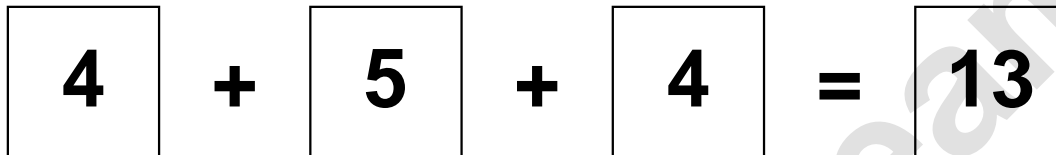
Aufgaben rechnen mit Bildern. Der Würfel.
Ergebnisse im Zahlenbereich bis 16.

Lösungen

Aufgabe 1.)



A visual equation showing three dice. The first die shows 4 dots (two on the left, two on the right). The second die shows 5 dots (two on the left, two on the right, and one in the center). The third die shows 4 dots (two on the left, two on the right). The equation is 4 + 5 + 4 = 13.




A numerical equation: 4 + 5 + 4 = 13.

Aufgabe 2.)



A visual equation showing three dice. The first die shows 6 dots (two on the left, two on the right, and two in the middle). The second die shows 4 dots (two on the left, two on the right). The third die shows 6 dots (two on the left, two on the right, and two in the middle). The equation is 6 + 4 + 6 = 16.



A numerical equation: 6 + 4 + 6 = 16.