


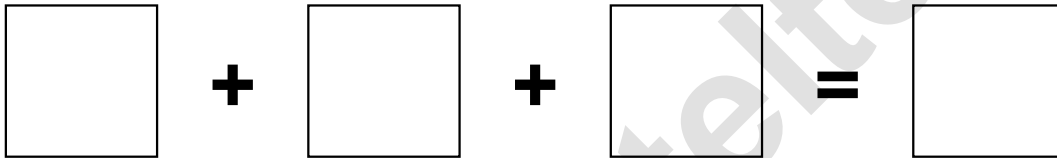
Aufgaben rechnen mit Bildern. Der Würfel.
Ergebnisse im Zahlenbereich bis 16.

Name:	Klasse:	Datum:
-------	---------	--------

Aufgabe 1.)


Zähle die Punkte auf den Würfeln und addiere.



$$\begin{array}{ccccccc} \boxed{\begin{array}{c} \bullet \\ \bullet \end{array}} & + & \boxed{\begin{array}{c} \bullet \\ \bullet \bullet \end{array}} & + & \boxed{\begin{array}{c} \bullet \bullet \\ \bullet \bullet \end{array}} & = & \boxed{} \\ & & & & & & \end{array}$$


$$\begin{array}{ccccccc} \boxed{} & + & \boxed{} & + & \boxed{} & = & \boxed{} \end{array}$$

Aufgabe 2.)

Zähle die Punkte auf den Würfeln und addiere.



$$\begin{array}{ccccccc} \boxed{\begin{array}{c} \bullet \bullet \\ \bullet \bullet \end{array}} & + & \boxed{\begin{array}{c} \bullet \\ \bullet \end{array}} & + & \boxed{\begin{array}{c} \bullet \bullet \\ \bullet \bullet \end{array}} & = & \boxed{} \\ & & & & & & \end{array}$$

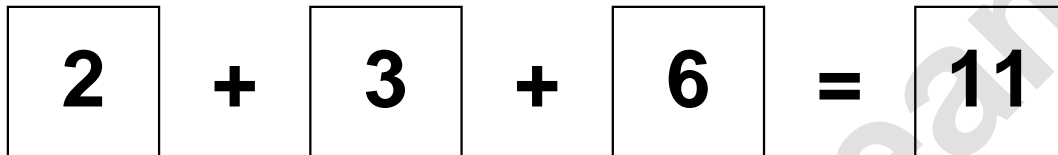

$$\begin{array}{ccccccc} \boxed{} & + & \boxed{} & + & \boxed{} & = & \boxed{} \end{array}$$

Aufgaben rechnen mit Bildern. Der Würfel.
Ergebnisse im Zahlenbereich bis 16.

Lösungen


Aufgabe 1.)


$$\begin{array}{|c|} \hline \bullet \\ \hline \bullet \end{array} + \begin{array}{|c|} \hline \bullet \\ \bullet \\ \hline \bullet \end{array} + \begin{array}{|c|} \hline \bullet \bullet \\ \bullet \bullet \\ \hline \bullet \bullet \end{array} = \begin{array}{|c|} \hline 11 \\ \hline \end{array}$$


$$\begin{array}{|c|} \hline 2 \\ \hline \end{array} + \begin{array}{|c|} \hline 3 \\ \hline \end{array} + \begin{array}{|c|} \hline 6 \\ \hline \end{array} = \begin{array}{|c|} \hline 11 \\ \hline \end{array}$$

Aufgabe 2.)


$$\begin{array}{|c|} \hline \bullet \bullet \\ \bullet \\ \hline \bullet \bullet \end{array} + \begin{array}{|c|} \hline \bullet \\ \hline \bullet \end{array} + \begin{array}{|c|} \hline \bullet \bullet \\ \bullet \bullet \\ \hline \bullet \bullet \end{array} = \begin{array}{|c|} \hline 13 \\ \hline \end{array}$$


$$\begin{array}{|c|} \hline 5 \\ \hline \end{array} + \begin{array}{|c|} \hline 2 \\ \hline \end{array} + \begin{array}{|c|} \hline 6 \\ \hline \end{array} = \begin{array}{|c|} \hline 13 \\ \hline \end{array}$$