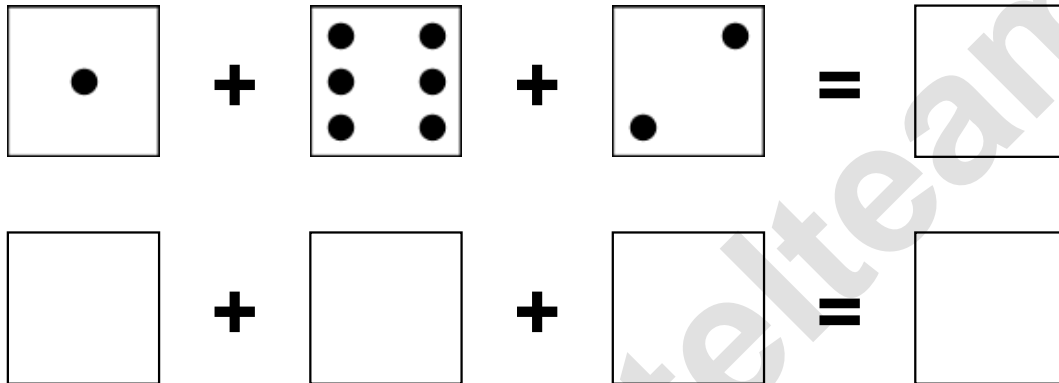


Aufgaben rechnen mit Bildern. Der Würfel.
Ergebnisse im Zahlenbereich bis 16.

Name:	Klasse:	Datum:
-------	---------	--------

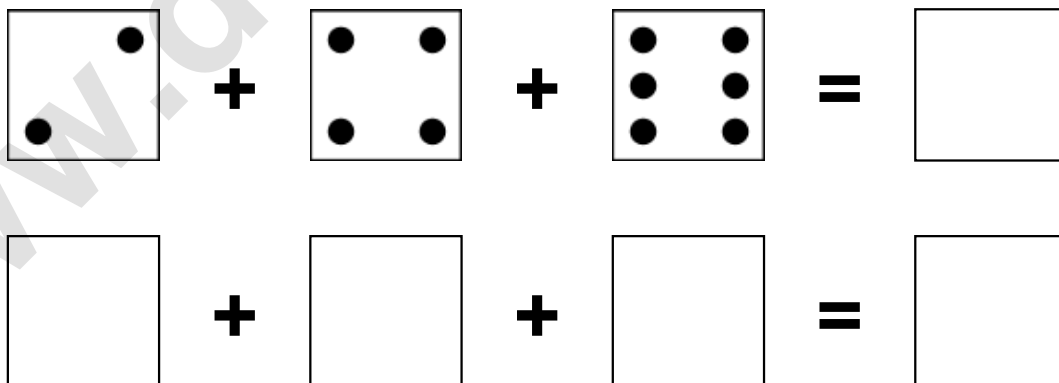
Aufgabe 1.)

Zähle die Punkte auf den Würfeln und addiere.



Aufgabe 2.)


Zähle die Punkte auf den Würfeln und addiere.



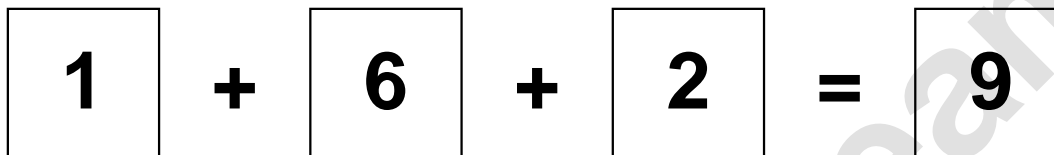
Aufgaben rechnen mit Bildern. Der Würfel.
Ergebnisse im Zahlenbereich bis 16.

Lösungen

Aufgabe 1.)



A visual equation using dice faces. The first square shows 1 dot, followed by a plus sign, a square showing 6 dots, another plus sign, a square showing 2 dots, an equals sign, and a final square showing the number 9.




A numerical equation using boxes. The first box contains the number 1, followed by a plus sign, a box containing 6, another plus sign, a box containing 2, an equals sign, and a final box containing the number 9.

Aufgabe 2.)



A visual equation using dice faces. The first square shows 2 dots, followed by a plus sign, a square showing 4 dots, another plus sign, a square showing 6 dots, an equals sign, and a final square showing the number 12.



A numerical equation using boxes. The first box contains the number 2, followed by a plus sign, a box containing 4, another plus sign, a box containing 6, an equals sign, and a final box containing the number 12.