


Aufgaben rechnen mit Bildern. Der Würfel.
Ergebnisse im Zahlenbereich bis 16.

Name:	Klasse:	Datum:
-------	---------	--------


Aufgabe 1.)

Zähle die Punkte auf den Würfeln und addiere.


$$\begin{array}{ccccccc} \boxed{\begin{array}{cc} \bullet & \bullet \\ \bullet & \bullet \\ \bullet & \bullet \end{array}} & + & \boxed{\begin{array}{cc} \bullet & \bullet \\ & \\ \bullet & \bullet \end{array}} & + & \boxed{\begin{array}{cc} \bullet & \bullet \\ & \\ \bullet & \bullet \end{array}} & = & \boxed{} \\ \\ \boxed{} & + & \boxed{} & + & \boxed{} & = & \boxed{} \end{array}$$

Aufgabe 2.)


Zähle die Punkte auf den Würfeln und addiere.


$$\begin{array}{ccccccc} \boxed{\begin{array}{cc} \bullet & \bullet \\ & \bullet \\ \bullet & \bullet \end{array}} & + & \boxed{\bullet} & + & \boxed{\begin{array}{cc} & \bullet \\ \bullet & \end{array}} & = & \boxed{} \\ \\ \boxed{} & + & \boxed{} & + & \boxed{} & = & \boxed{} \end{array}$$

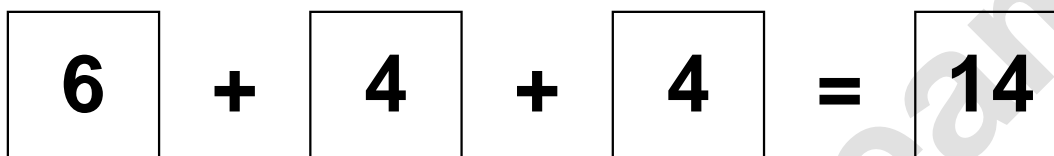
Aufgaben rechnen mit Bildern. Der Würfel.
Ergebnisse im Zahlenbereich bis 16.

Lösungen

Aufgabe 1.)



A visual equation showing three dice. The first die shows 6 dots (two columns of three), the second shows 4 dots (two columns of two), and the third shows 4 dots (two columns of two). They are followed by a plus sign, an equals sign, and a box containing the number 14.



A numerical equation: a box with the number 6, followed by a plus sign, a box with the number 4, followed by a plus sign, a box with the number 4, followed by an equals sign, and a box with the number 14.

Aufgabe 2.)



A visual equation showing three dice. The first die shows 5 dots (four in a square and one in the center), the second shows 1 dot (one in the center), and the third shows 2 dots (one in the top-right and one in the bottom-left). They are followed by a plus sign, an equals sign, and a box containing the number 8.



A numerical equation: a box with the number 5, followed by a plus sign, a box with the number 1, followed by a plus sign, a box with the number 2, followed by an equals sign, and a box with the number 8.