









Aufgaben rechnen mit Bildern. Der Würfel.  
Ergebnisse im Zahlenbereich bis 16.

Name:	Klasse:	Datum:
-------	---------	--------









**Aufgabe 1.)**

**Zähle die Punkte auf den Würfeln und addiere.**

 $+$  $+$  $=$   
 $+$  $+$  $=$ 

**Aufgabe 2.)**


**Zähle die Punkte auf den Würfeln und addiere.**

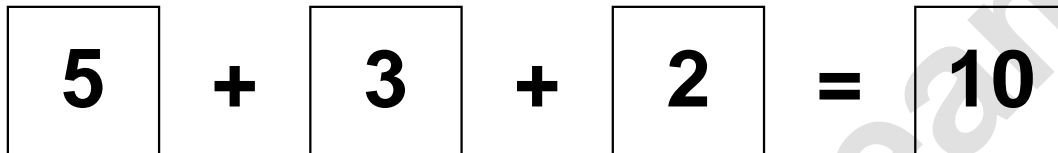
 $+$  $+$  $=$   
 $+$  $+$  $=$ 

Aufgaben rechnen mit Bildern. Der Würfel.  
Ergebnisse im Zahlenbereich bis 16.

Lösungen


Aufgabe 1.)


$$\begin{array}{|c|} \hline \bullet \quad \bullet \\ \bullet \quad \bullet \\ \hline \end{array} + \begin{array}{|c|} \hline \bullet \\ \bullet \quad \bullet \\ \bullet \\ \hline \end{array} + \begin{array}{|c|} \hline \bullet \\ \bullet \\ \bullet \\ \hline \end{array} =$$


$$\begin{array}{|c|} \hline 5 \\ \hline \end{array} + \begin{array}{|c|} \hline 3 \\ \hline \end{array} + \begin{array}{|c|} \hline 2 \\ \hline \end{array} =$$

Aufgabe 2.)


$$\begin{array}{|c|} \hline \bullet \quad \bullet \\ \bullet \quad \bullet \\ \hline \end{array} + \begin{array}{|c|} \hline \bullet \\ \bullet \\ \bullet \\ \hline \end{array} + \begin{array}{|c|} \hline \bullet \\ \bullet \\ \bullet \\ \hline \end{array} =$$


$$\begin{array}{|c|} \hline 4 \\ \hline \end{array} + \begin{array}{|c|} \hline 2 \\ \hline \end{array} + \begin{array}{|c|} \hline 2 \\ \hline \end{array} =$$