

Aufgaben rechnen mit Bildern. Der Würfel.  
Ergebnisse im Zahlenbereich bis 16.

|       |         |        |
|-------|---------|--------|
| Name: | Klasse: | Datum: |
|-------|---------|--------|

**Aufgabe 1.)**

**Zähle die Punkte auf den Würfeln und addiere.**

$$\begin{array}{ccccccc} \begin{array}{|c|c|c|} \hline & & \bullet \\ \hline & \bullet & \\ \hline \bullet & & \\ \hline \end{array} & + & \begin{array}{|c|c|c|} \hline \bullet & & \bullet \\ \hline \bullet & & \bullet \\ \hline \bullet & & \bullet \\ \hline \end{array} & + & \begin{array}{|c|c|c|} \hline & & \bullet \\ \hline \bullet & & \\ \hline & & \bullet \\ \hline \end{array} & = & \begin{array}{|c|c|c|} \hline & & \\ \hline & & \\ \hline & & \\ \hline \end{array} \\ \\ \begin{array}{|c|c|c|} \hline & & \\ \hline & & \\ \hline & & \\ \hline \end{array} & + & \begin{array}{|c|c|c|} \hline & & \\ \hline & & \\ \hline & & \\ \hline \end{array} & + & \begin{array}{|c|c|c|} \hline & & \\ \hline & & \\ \hline & & \\ \hline \end{array} & = & \begin{array}{|c|c|c|} \hline & & \\ \hline & & \\ \hline & & \\ \hline \end{array} \end{array}$$

**Aufgabe 2.)**


**Zähle die Punkte auf den Würfeln und addiere.**

$$\begin{array}{ccccccc} \begin{array}{|c|c|c|} \hline \bullet & & \bullet \\ \hline \bullet & & \bullet \\ \hline \bullet & & \bullet \\ \hline \end{array} & + & \begin{array}{|c|c|c|} \hline & \bullet & \\ \hline & & \\ \hline & & \\ \hline \end{array} & + & \begin{array}{|c|c|c|} \hline & \bullet & \\ \hline & & \\ \hline & & \\ \hline \end{array} & = & \begin{array}{|c|c|c|} \hline & & \\ \hline & & \\ \hline & & \\ \hline \end{array} \\ \\ \begin{array}{|c|c|c|} \hline & & \\ \hline & & \\ \hline & & \\ \hline \end{array} & + & \begin{array}{|c|c|c|} \hline & & \\ \hline & & \\ \hline & & \\ \hline \end{array} & + & \begin{array}{|c|c|c|} \hline & & \\ \hline & & \\ \hline & & \\ \hline \end{array} & = & \begin{array}{|c|c|c|} \hline & & \\ \hline & & \\ \hline & & \\ \hline \end{array} \end{array}$$

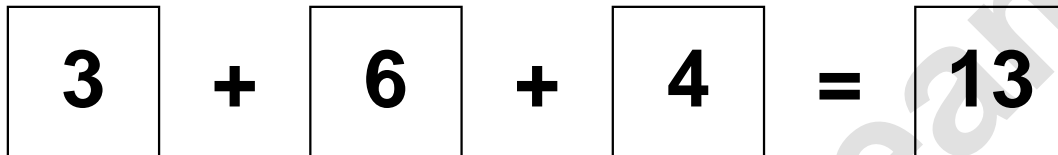
Aufgaben rechnen mit Bildern. Der Würfel.  
Ergebnisse im Zahlenbereich bis 16.

Lösungen

Aufgabe 1.)



A visual equation using dice faces. The first die shows 3 dots, the second shows 6 dots, and the third shows 4 dots. They are added together to equal 13.




A numerical equation using boxes. The first box contains the number 3, the second contains 6, and the third contains 4. They are added together to equal 13.

Aufgabe 2.)



A visual equation using dice faces. The first die shows 6 dots, the second shows 1 dot, and the third shows 1 dot. They are added together to equal 8.



A numerical equation using boxes. The first box contains the number 6, the second contains 1, and the third contains 1. They are added together to equal 8.