

Name:

Klasse:

Datum:


Aufgabe 1.




+



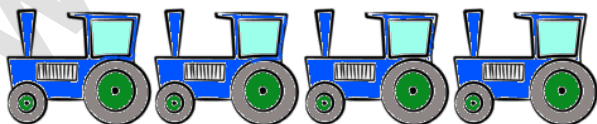
=




Aufgabe 2.



+

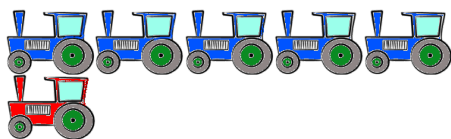


=




Lösungen

Aufgabe 1:



6

Aufgabe 2:



8