



Übungsaufgaben Rechnen mit Bildern.

Name:	Klasse:	Datum:
-------	---------	--------


Aufgabe 1.



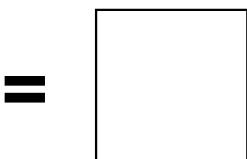
+



Aufgabe 2.



+




Übungsaufgaben Rechnen mit Bildern.

Lösungen



**3**



**7**

www.das-bastelteam.de