

Name:	Klasse:	Datum:
-------	---------	--------

Aufgabe 1.




+

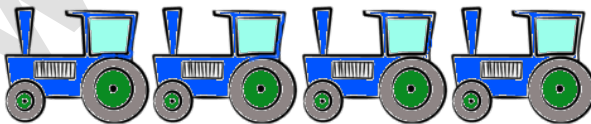


=

Aufgabe 2.




+



=

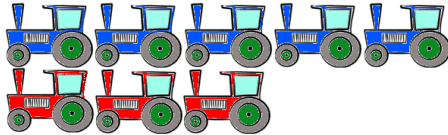
Lösungen

Aufgabe 1:



10

Aufgabe 2:



8