


Name:	Klasse:	Datum:
-------	---------	--------


Aufgabe 1.




+



=




Aufgabe 2.



+



=




Lösungen

Aufgabe 1:



5

Aufgabe 2:



8