

Name:	Klasse:	Datum:
-------	---------	--------


Aufgabe 1.



+



=




Aufgabe 2.



+




=




Lösungen

Aufgabe 1:



9

Aufgabe 2:



6