



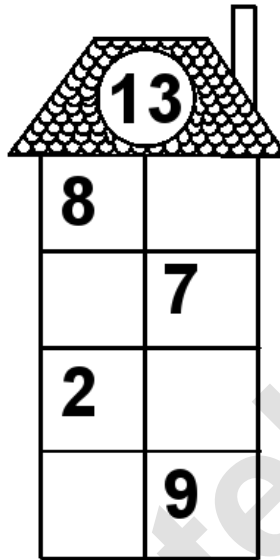
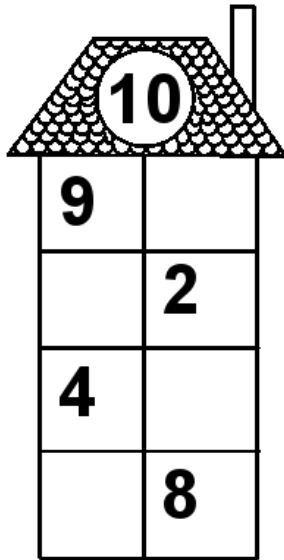


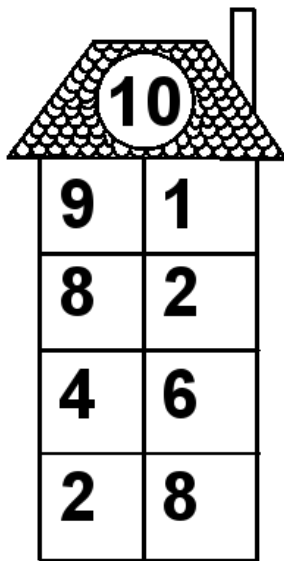
Rechenhäuser.

Name:	Klasse:	Datum:
-------	---------	--------



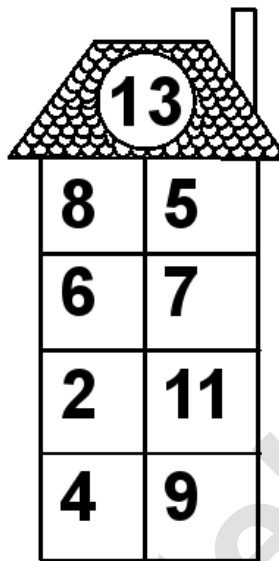
Rechenhäuser.

Lösungen




A house-shaped grid with a triangular roof containing the number 10. The body of the house is a 4x2 grid of numbers.

10	
9	1
8	2
4	6
2	8




A house-shaped grid with a triangular roof containing the number 13. The body of the house is a 4x2 grid of numbers.

13	
8	5
6	7
2	11
4	9




A house-shaped grid with a triangular roof containing the number 15. The body of the house is a 4x2 grid of numbers.

15	
11	4
4	11
5	10
7	8




A house-shaped grid with a triangular roof containing the number 18. The body of the house is a 4x2 grid of numbers.

18	
3	15
7	11
9	9
13	5



A house-shaped grid with a triangular roof containing the number 19. The body of the house is a 4x2 grid of numbers.

19	
4	15
5	14
6	13
18	1



A house-shaped grid with a triangular roof containing the number 20. The body of the house is a 4x2 grid of numbers.

20	
8	12
3	17
9	11
12	8