








Rechenhäuser.

Name:	Klasse:	Datum:
-------	---------	--------



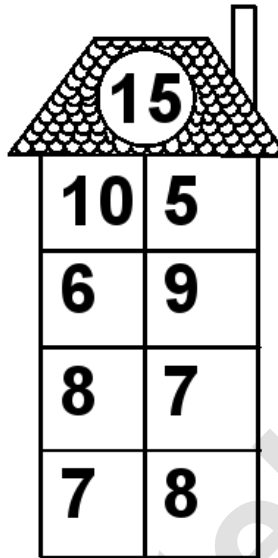
Rechenhäuser.

Lösungen




A house-shaped grid with a target number 10 in the roof. The grid consists of a 4x2 table of numbers.

10	
8	2
7	3
6	4
10	0




A house-shaped grid with a target number 15 in the roof. The grid consists of a 4x2 table of numbers.

15	
10	5
6	9
8	7
7	8




A house-shaped grid with a target number 16 in the roof. The grid consists of a 4x2 table of numbers.

16	
12	4
14	2
6	10
4	12




A house-shaped grid with a target number 18 in the roof. The grid consists of a 4x2 table of numbers.

18	
11	7
4	14
16	2
13	5



A house-shaped grid with a target number 19 in the roof. The grid consists of a 4x2 table of numbers.

19	
7	12
11	8
2	17
5	14



A house-shaped grid with a target number 20 in the roof. The grid consists of a 4x2 table of numbers.

20	
6	14
14	6
9	11
3	17