



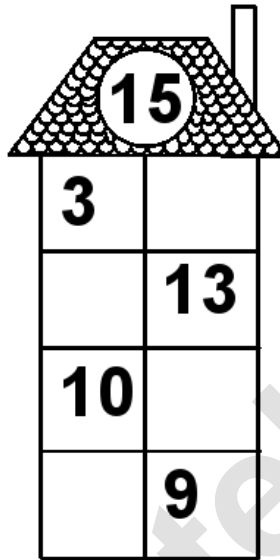



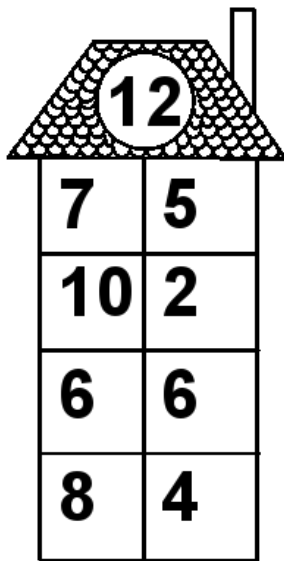
Rechenhäuser.

Name:	Klasse:	Datum:
-------	---------	--------



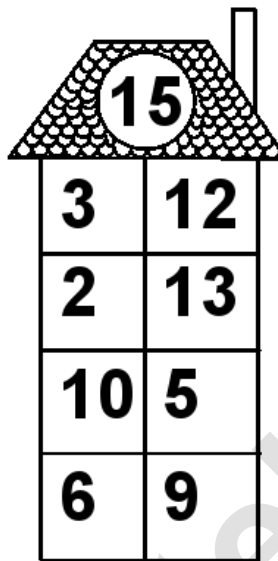
Rechenhäuser.

Lösungen




A house-shaped grid with a target number 12 in the roof. The grid consists of a 4x2 table of numbers.

12	
7	5
10	2
6	6
8	4




A house-shaped grid with a target number 15 in the roof. The grid consists of a 4x2 table of numbers.

15	
3	12
2	13
10	5
6	9




A house-shaped grid with a target number 17 in the roof. The grid consists of a 4x2 table of numbers.

17	
13	4
1	16
6	11
14	3




A house-shaped grid with a target number 18 in the roof. The grid consists of a 4x2 table of numbers.

18	
6	12
5	13
15	3
3	15



A house-shaped grid with a target number 19 in the roof. The grid consists of a 4x2 table of numbers.

19	
19	0
4	15
13	6
15	4



A house-shaped grid with a target number 20 in the roof. The grid consists of a 4x2 table of numbers.

20	
8	12
19	1
18	2
20	0