







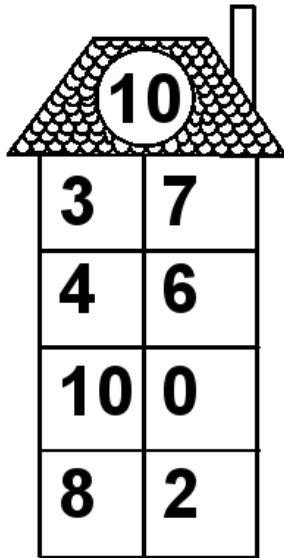
Rechenhäuser.

|       |         |        |
|-------|---------|--------|
| Name: | Klasse: | Datum: |
|-------|---------|--------|



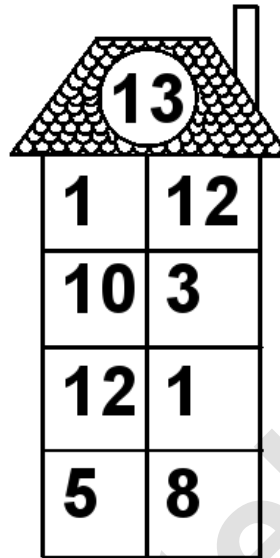
Rechenhäuser.

Lösungen




A house-shaped grid with a target number 10 in the roof. The grid consists of a 4x2 table of numbers.

|    |   |
|----|---|
| 10 |   |
| 3  | 7 |
| 4  | 6 |
| 10 | 0 |
| 8  | 2 |




A house-shaped grid with a target number 13 in the roof. The grid consists of a 4x2 table of numbers.

|    |    |
|----|----|
| 13 |    |
| 1  | 12 |
| 10 | 3  |
| 12 | 1  |
| 5  | 8  |




A house-shaped grid with a target number 16 in the roof. The grid consists of a 4x2 table of numbers.

|    |    |
|----|----|
| 16 |    |
| 7  | 9  |
| 14 | 2  |
| 6  | 10 |
| 2  | 14 |




A house-shaped grid with a target number 18 in the roof. The grid consists of a 4x2 table of numbers.

|    |    |
|----|----|
| 18 |    |
| 10 | 8  |
| 2  | 16 |
| 5  | 13 |
| 14 | 4  |



A house-shaped grid with a target number 19 in the roof. The grid consists of a 4x2 table of numbers.

|    |    |
|----|----|
| 19 |    |
| 11 | 8  |
| 18 | 1  |
| 4  | 15 |
| 1  | 18 |



A house-shaped grid with a target number 20 in the roof. The grid consists of a 4x2 table of numbers.

|    |    |
|----|----|
| 20 |    |
| 11 | 9  |
| 12 | 8  |
| 7  | 13 |
| 17 | 3  |