



Rechenhäuser.

Name:	Klasse:	Datum:
-------	---------	--------




House-shaped math grid with roof number 12. The grid is a 4x2 table with a chimney on the right side.

5	
	1
10	
	0




House-shaped math grid with roof number 14. The grid is a 4x2 table with a chimney on the right side.

4	
	5
3	
	7




House-shaped math grid with roof number 16. The grid is a 4x2 table with a chimney on the right side.

14	
	11
15	
	10




House-shaped math grid with roof number 18. The grid is a 4x2 table with a chimney on the right side.

1	
	6
4	
	10



House-shaped math grid with roof number 19. The grid is a 4x2 table with a chimney on the right side.

17	
	15
16	
	0



House-shaped math grid with roof number 20. The grid is a 4x2 table with a chimney on the right side.

5	
	5
20	
	12

