








Rechenhäuser.

Name:	Klasse:	Datum:
-------	---------	--------



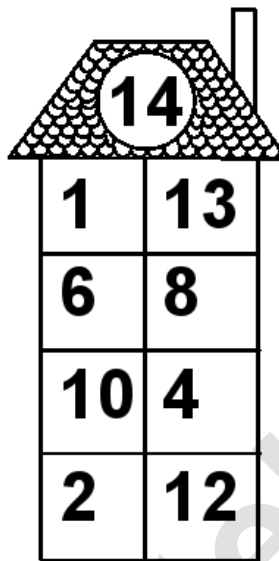
Rechenhäuser.

Lösungen




A house-shaped grid with a target number 12 in the roof. The grid consists of a 4x2 table of numbers.

12	
9	3
2	10
6	6
11	1




A house-shaped grid with a target number 14 in the roof. The grid consists of a 4x2 table of numbers.

14	
1	13
6	8
10	4
2	12



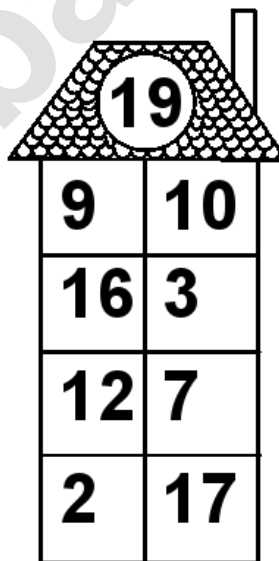
A house-shaped grid with a target number 16 in the roof. The grid consists of a 4x2 table of numbers.

16	
13	3
15	1
6	10
16	0




A house-shaped grid with a target number 18 in the roof. The grid consists of a 4x2 table of numbers.

18	
17	1
8	10
18	0
16	2



A house-shaped grid with a target number 19 in the roof. The grid consists of a 4x2 table of numbers.

19	
9	10
16	3
12	7
2	17



A house-shaped grid with a target number 20 in the roof. The grid consists of a 4x2 table of numbers.

20	
17	3
1	19
11	9
15	5