



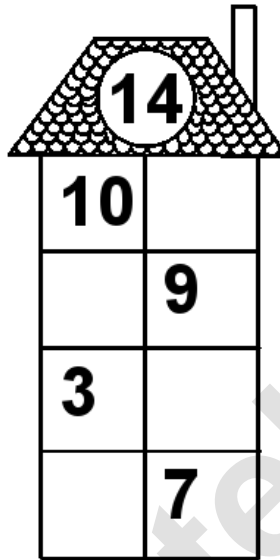
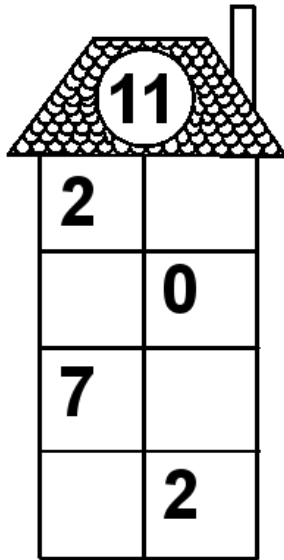


Rechenhäuser.

Name:	Klasse:	Datum:
-------	---------	--------



Rechenhäuser.

Lösungen

11	
2	9
11	0
7	4
9	2

14	
10	4
5	9
3	11
7	7

17	
11	6
12	5
2	15
8	9

18	
17	1
2	16
10	8
7	11

19	
3	16
4	15
7	12
13	6

20	
3	17
16	4
18	2
13	7