



Rechenhäuser.

Name:	Klasse:	Datum:
-------	---------	--------




House-shaped math grid for number 12. The roof contains the number 12. The body is a 4x2 grid of boxes.

12	
	7
9	
	5




House-shaped math grid for number 13. The roof contains the number 13. The body is a 4x2 grid of boxes.

10	
	7
2	
	10




House-shaped math grid for number 16. The roof contains the number 16. The body is a 4x2 grid of boxes.

13	
	9
16	
	10




House-shaped math grid for number 18. The roof contains the number 18. The body is a 4x2 grid of boxes.

9	
	0
13	
	2



House-shaped math grid for number 19. The roof contains the number 19. The body is a 4x2 grid of boxes.

11	
	15
3	
	1

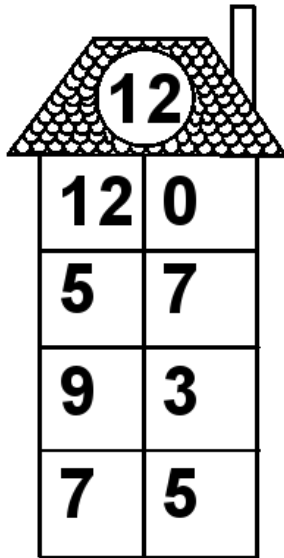


House-shaped math grid for number 20. The roof contains the number 20. The body is a 4x2 grid of boxes.

1	
	4
15	
	8

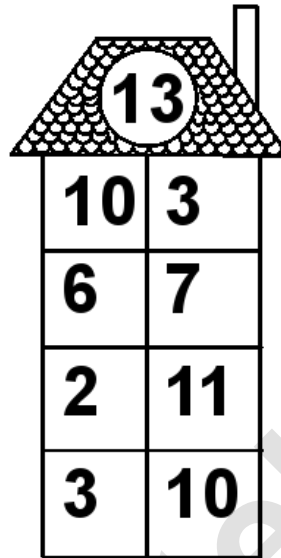
Rechenhäuser.

Lösungen




A house-shaped addition grid with a target number 12 in the roof. The body consists of a 4x2 grid of boxes for numbers.

12	
12	0
5	7
9	3
7	5




A house-shaped addition grid with a target number 13 in the roof. The body consists of a 4x2 grid of boxes for numbers.

13	
10	3
6	7
2	11
3	10




A house-shaped addition grid with a target number 16 in the roof. The body consists of a 4x2 grid of boxes for numbers.

16	
13	3
7	9
16	0
6	10




A house-shaped addition grid with a target number 18 in the roof. The body consists of a 4x2 grid of boxes for numbers.

18	
9	9
18	0
13	5
16	2



A house-shaped addition grid with a target number 19 in the roof. The body consists of a 4x2 grid of boxes for numbers.

19	
11	8
4	15
3	16
18	1



A house-shaped addition grid with a target number 20 in the roof. The body consists of a 4x2 grid of boxes for numbers.

20	
1	19
16	4
15	5
12	8