


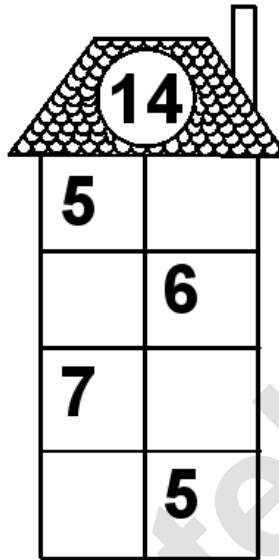
Rechenhäuser.

Name:	Klasse:	Datum:
-------	---------	--------




House-shaped math grid with roof number 12. The grid is a 4x2 table with the following numbers:

12	
	8
9	
	2




House-shaped math grid with roof number 14. The grid is a 4x2 table with the following numbers:

5	
	6
7	
	5




House-shaped math grid with roof number 17. The grid is a 4x2 table with the following numbers:

9	
	12
15	
	10




House-shaped math grid with roof number 18. The grid is a 4x2 table with the following numbers:

9	
	6
2	
	1



House-shaped math grid with roof number 19. The grid is a 4x2 table with the following numbers:

11	
	18
6	
	1



House-shaped math grid with roof number 20. The grid is a 4x2 table with the following numbers:

11	
	12
20	
	14

Rechenhäuser.

Lösungen

